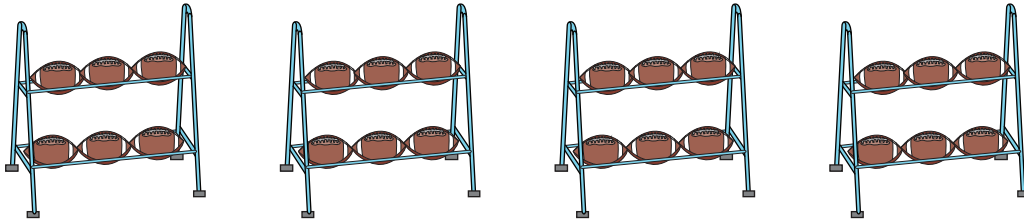


Equal Groups: Multiplication Sentence


Complete the multiplication equation that describes each model.

1)




$$4 \times \square = 12$$

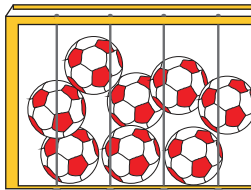
2)



$$\square \times 5 = 10$$




3)

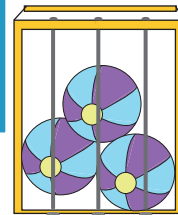


$$2 \times \square = 10$$


4)




$$\square \times 3 = 15$$



5)



$$2 \times \square = 18$$



PREVIEW

Gain complete access to the largest collection of worksheets in all subjects!

Members, please log in to download this worksheet.

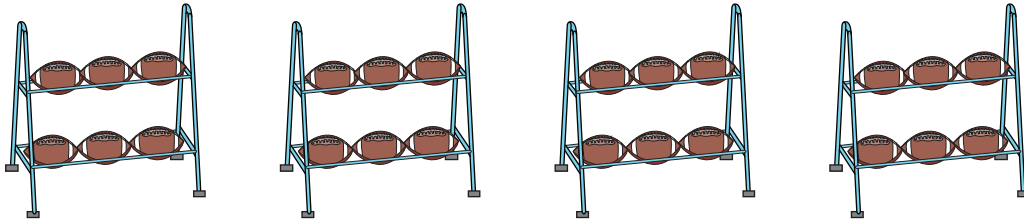
Not a member? Please sign up to gain complete access.

www.mathworksheets4kids.com

Equal Groups: Multiplication Sentence


Complete the multiplication equation that describes each model.

1)




$$4 \times \boxed{6} = 24$$

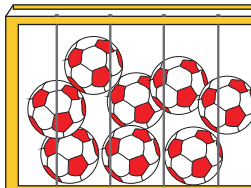
2)



$$\boxed{7} \times 2 = 14$$




3)

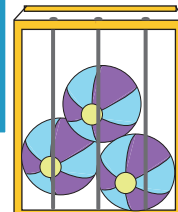


$$2 \times 5 = 10$$

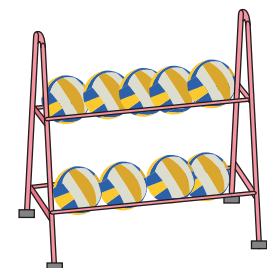
4)




$$\boxed{5} \times 3 = 15$$



5)



$$2 \times \boxed{9} = 18$$



PREVIEW

Gain complete access to the largest collection of worksheets in all subjects!

Members, please log in to download this worksheet.

Not a member? Please sign up to gain complete access.

www.mathworksheets4kids.com