


Equal Groups: Multiplication Sentence


Complete the multiplication equation that describes each model.

1)




$$\square \times 5 = 15$$

2)




$$\square$$


3)




$$7 \times \square$$



4)



$$4 \times \square = 28$$



5)



$$\square \times 3 = 15$$

PREVIEW

Gain complete access to the largest collection of worksheets in all subjects!

Members, please log in to download this worksheet.


Not a member? Please sign up to gain complete access.

www.mathworksheets4kids.com

Equal Groups: Multiplication Sentence


Complete the multiplication equation that describes each model.

1)



$$\boxed{3} \times 5 = 15$$

2)



$$\boxed{2}$$


Gain complete access to the largest
collection of worksheets in all subjects!


Members, please
log in to
download this
worksheet.

Not a member?
Please sign up to
gain complete
access.


www.mathworksheets4kids.com

3)




$$7 \times$$



4)



$$4 \times \boxed{7} = 28$$



5)



$$\boxed{5} \times 3 = 15$$