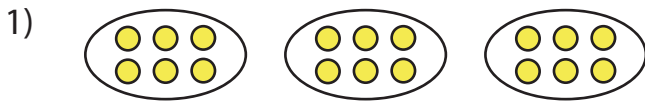


Equal Groups: Multiplication Sentence


A) Identify the multiplication sentence that describes each model.



- a) 1×6 b) 3×4 c) 3×3 d) 3×6



- a) 6×4



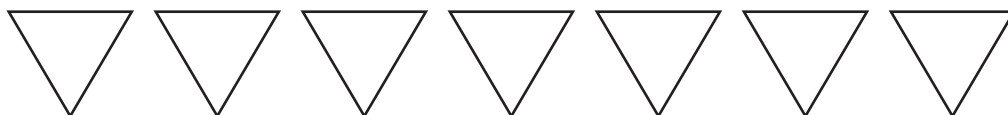
- a) 3×10




- a) 6×5

B) Draw equal groups _____ multiplication sentence.

1) $7 \times 3 =$ _____



2) $4 \times 9 =$ _____



PREVIEW

Gain complete access to the largest collection of worksheets in all subjects!

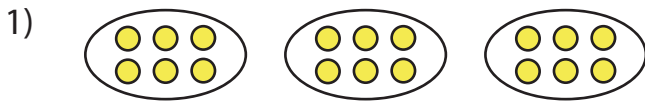
Members, please log in to download this worksheet.

Not a member? Please sign up to gain complete access.

www.mathworksheets4kids.com

Equal Groups: Multiplication Sentence


A) Identify the multiplication sentence that describes each model.



- a) 1×6 b) 3×4 c) 3×3 d) 3×6



- a) 6×4



- a) 3×10



- a) 6×5

PREVIEW

Gain complete access to the largest collection of worksheets in all subjects!

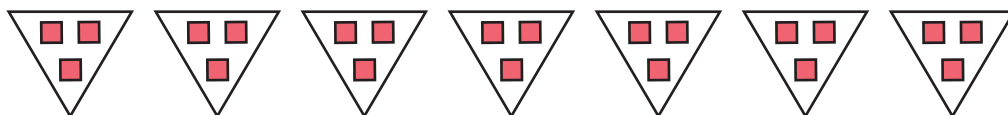
Members, please log in to download this worksheet.

Not a member? Please sign up to gain complete access.

www.mathworksheets4kids.com

B) Draw equal groups. Write the multiplication sentence. (Drawings may vary)

1) $7 \times 3 = \underline{21}$



2) $4 \times 9 = \underline{36}$

