

**Equal Groups: Multiplication Sentence**


A) Identify the multiplication sentence that describes each model.



- a)  $1 \times 8$       b)  $4 \times 8$       c)  $3 \times 8$       d)  $4 \times 4$



- a)  $2 \times 9$



- a)  $5 \times 7$



- a)  $1 \times 8$

**PREVIEW**

Gain complete access to the largest collection of worksheets in all subjects!

Members, please log in to download this worksheet.

Not a member? Please sign up to gain complete access.

[www.mathworksheets4kids.com](http://www.mathworksheets4kids.com)

B) Draw equal groups \_\_\_\_\_ multiplication sentence.

1)  $4 \times 12 =$  \_\_\_\_\_




2)  $5 \times 4 =$  \_\_\_\_\_



**Equal Groups: Multiplication Sentence**

A) Identify the multiplication sentence that describes each model.



- a)  $1 \times 8$      **b)  $4 \times 8$**      c)  $3 \times 8$      d)  $4 \times 4$



- a)  $2 \times 9$**



- a)  $5 \times 7$




- a)  $1 \times 8$

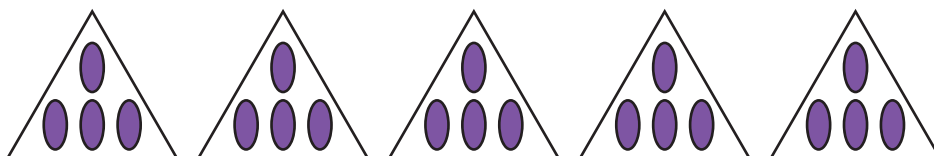
B) Draw equal groups  
(Drawings may

... multiplication sentence.

1)  $4 \times 12 = \underline{48}$



2)  $5 \times 4 = \underline{20}$



# PREVIEW

Gain complete access to the largest collection of worksheets in all subjects!

Members, please log in to download this worksheet.

Not a member? Please sign up to gain complete access.

www.mathworksheets4kids.com