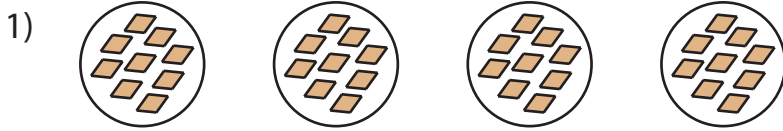


Equal Groups: Multiplication Sentence


A) Identify the multiplication sentence that describes each model.



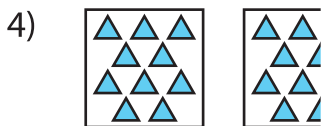
- a) 3×9 b) 2×8 c) 4×9 d) 4×8



- a) 1×2



- a) 3×7



- a) 1×10

PREVIEW

Gain complete access to the largest collection of worksheets in all subjects!

Members, please log in to download this worksheet.

Not a member? Please sign up to gain complete access.

www.mathworksheets4kids.com

B) Draw equal groups _____ multiplication sentence.

1) $3 \times 8 =$ _____

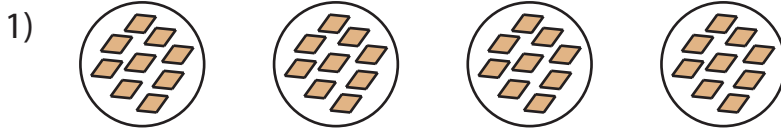


2) $9 \times 9 =$ _____



Equal Groups: Multiplication Sentence


A) Identify the multiplication sentence that describes each model.



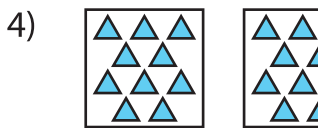
- a) 3×9 b) 2×8 c) 4×9 d) 4×8



- a) 1×2



- a) 3×7



- a) 1×10

PREVIEW

Gain complete access to the largest collection of worksheets in all subjects!

Members, please log in to download this worksheet.

Not a member? Please sign up to gain complete access.

www.mathworksheets4kids.com

B) Draw equal groups
(Drawings may

... multiplication sentence.

1) $3 \times 8 = \underline{24}$



2) $9 \times 9 = \underline{81}$

