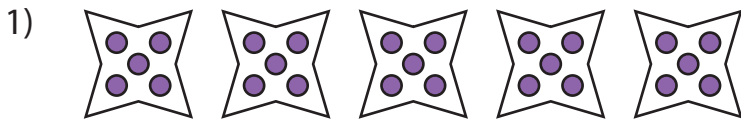



Equal Groups: Multiplication Sentence


A) Identify the multiplication sentence that describes each model.



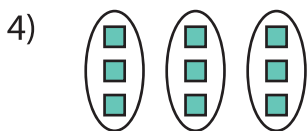
- a) 5×5 b) 4×5 c) 1×5 d) 3×5



- a) 1×8



- a) 4×1



- a) 11×3

PREVIEW

Gain complete access to the largest collection of worksheets in all subjects!

Members, please log in to download this worksheet.

Not a member? Please sign up to gain complete access.

www.mathworksheets4kids.com

B) Draw equal groups _____ multiplication sentence.

1) $6 \times 3 =$ _____

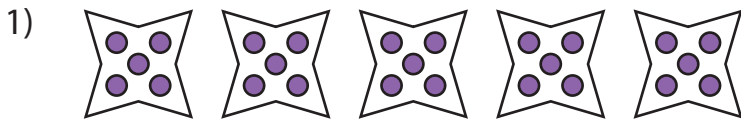


2) $8 \times 2 =$ _____




Equal Groups: Multiplication Sentence


A) Identify the multiplication sentence that describes each model.



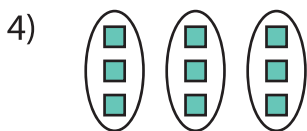
- ~~a) 5×5~~ b) 4×5 c) 1×5 d) 3×5



- a) 1×8



- a) 4×1



- a) 11×3

PREVIEW

Gain complete access to the largest collection of worksheets in all subjects!

Members, please log in to download this worksheet.

Not a member? Please sign up to gain complete access.

www.mathworksheets4kids.com

B) Draw equal groups
(Drawings may

...ation sentence.

1) $6 \times 3 = \underline{18}$



2) $8 \times 2 = \underline{16}$

