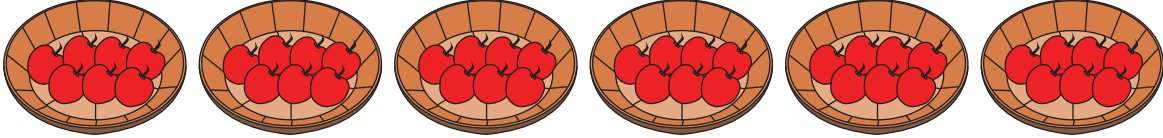


Equal Groups: Multiplication Sentence

Write a multiplication sentence that describes each model.

1)




_____ × _____ = _____

2)



_____ × _____ = _____

3)



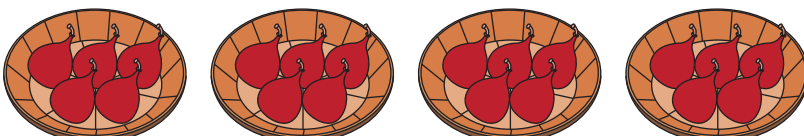
_____ × _____ = _____

4)



_____ × _____ = _____

5)



_____ × _____ = _____

PREVIEW

Gain complete access to the largest collection of worksheets in all subjects!

Members, please log in to download this worksheet.

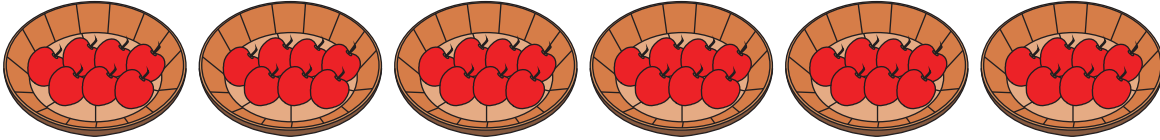
Not a member? Please sign up to gain complete access.

www.mathworksheets4kids.com

Equal Groups: Multiplication Sentence

Write a multiplication sentence that describes each model.

1)



$$\underline{6} \times \underline{7} = \underline{42}$$

2)



$$\underline{5}$$


Gain complete access to the largest
collection of worksheets in all subjects!

Members, please
log in to
download this
worksheet.

Not a member?
Please sign up to
gain complete
access.

www.mathworksheets4kids.com

3)



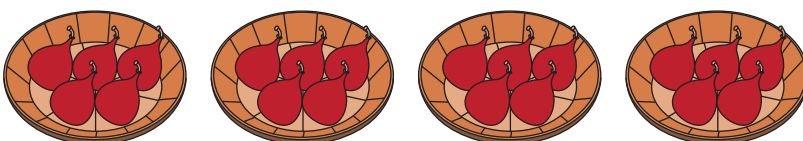
$$\underline{3}$$

4)



$$\underline{6} \times \underline{6} = \underline{36}$$

5)



$$\underline{4} \times \underline{5} = \underline{20}$$