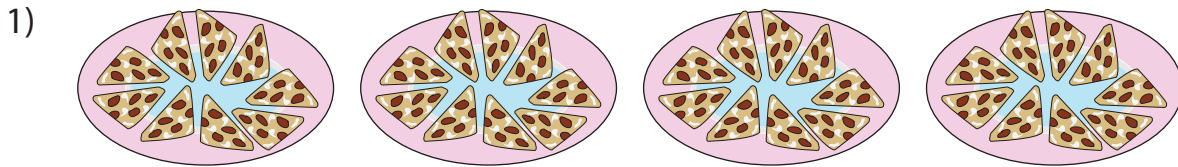


Equal Groups: Multiplication Sentence

Write a multiplication sentence that describes each model.



_____ × _____ = _____



PREVIEW

Gain complete access to the largest collection of worksheets in all subjects!

Members, please log in to download this worksheet.

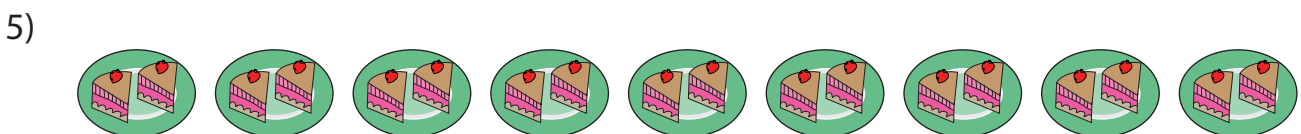
Not a member? Please sign up to gain complete access.

www.mathworksheets4kids.com





_____ × _____ = _____




_____ × _____ = _____

Equal Groups: Multiplication Sentence

Write a multiplication sentence that describes each model.

1)



$$\underline{4} \times \underline{9} = \underline{36}$$

2)



$$\underline{5}$$

PREVIEW

Gain complete access to the largest
collection of worksheets in all subjects!

Members, please
log in to
download this
worksheet.

Not a member?
Please sign up to
gain complete
access.

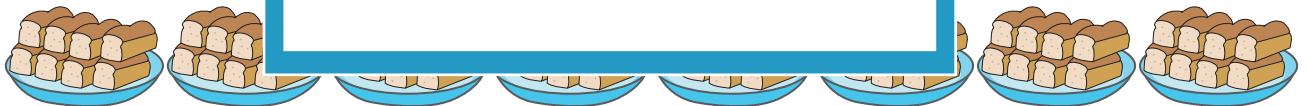
www.mathworksheets4kids.com

3)



$$\underline{7}$$

4)



$$\underline{8} \times \underline{8} = \underline{64}$$

5)



$$\underline{9} \times \underline{2} = \underline{18}$$