


Equal Groups: Multiplication Sentence

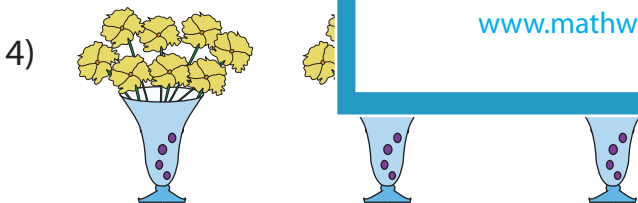
Write a multiplication sentence that describes each model.




_____ × _____ = _____







_____ × _____ = _____



_____ × _____ = _____

PREVIEW

Gain complete access to the largest collection of worksheets in all subjects!


Members, please log in to download this worksheet.

Not a member? Please sign up to gain complete access.

www.mathworksheets4kids.com

Equal Groups: Multiplication Sentence

Write a multiplication sentence that describes each model.



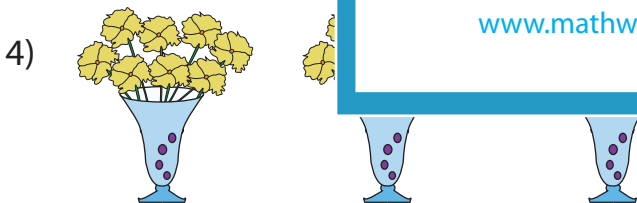
$$\underline{5} \times \underline{7} = \underline{35}$$




$$\underline{8}$$



$$\underline{2}$$



$$\underline{3} \times \underline{8} = \underline{24}$$



$$\underline{4} \times \underline{11} = \underline{44}$$

PREVIEW

Gain complete access to the largest collection of worksheets in all subjects!

Members, please log in to download this worksheet.

Not a member? Please sign up to gain complete access.

www.mathworksheets4kids.com