


Equal Groups: Multiplication Sentence

Write-L2: S4

Write a multiplication sentence to describe each model.

1)




$$\underline{\quad} \times \underline{\quad} = \underline{\quad}$$

2)



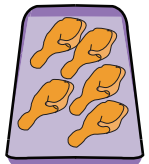
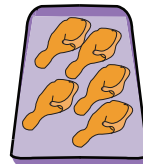
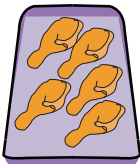
$$\underline{\quad} \times \underline{\quad} = \underline{\quad}$$

3)



$$\underline{\quad} \times \underline{\quad} = \underline{\quad}$$

4)



$$\underline{\quad} \times \underline{\quad} = \underline{\quad}$$

5)



$$\underline{\quad} \times \underline{\quad} = \underline{\quad}$$

PREVIEW

Gain complete access to the largest collection of worksheets in all subjects!

Members, please log in to download this worksheet.

Not a member? Please sign up to gain complete access.


www.mathworksheets4kids.com

Equal Groups: Multiplication Sentence

Write-L2: S4


Write a multiplication sentence to describe each model.

1)




$$\underline{6} \times \underline{3} = \underline{18}$$

2)



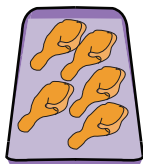
$$\underline{4}$$

3)



$$\underline{2}$$

4)



$$\underline{8} \times \underline{5} = \underline{40}$$

5)



$$\underline{3} \times \underline{7} = \underline{21}$$

PREVIEW

Gain complete access to the largest
collection of worksheets in all subjects!

Members, please
log in to
download this
worksheet.

Not a member?
Please sign up to
gain complete
access.

www.mathworksheets4kids.com