


Name : _____


Equal Groups: Multiplication Sentence

Write-L2S5

Write a multiplication sentence that describes each model.



_____ × _____ = _____



PREVIEW

Gain complete access to the largest collection of worksheets in all subjects!

Members, please log in to download this worksheet.

Not a member? Please sign up to gain complete access.

www.mathworksheets4kids.com





_____ × _____ = _____




_____ × _____ = _____

Equal Groups: Multiplication Sentence

Write a multiplication sentence that describes each model.



$$\underline{7} \times \underline{7} = \underline{49}$$



$$\underline{3}$$

Gain complete access to the largest
collection of worksheets in all subjects!



$$\underline{6}$$

Members, please
log in to
download this
worksheet.

Not a member?
Please sign up to
gain complete
access.

www.mathworksheets4kids.com



$$\underline{9} \times \underline{2} = \underline{18}$$



$$\underline{2} \times \underline{10} = \underline{20}$$