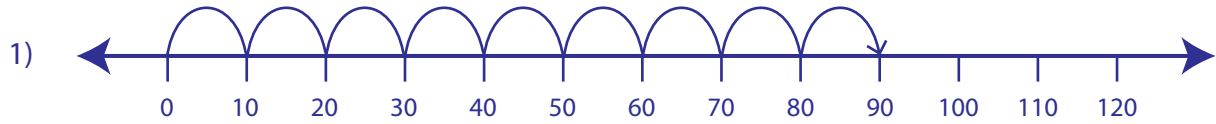



Multiplication Sentence - Number Lines

Complete: 55

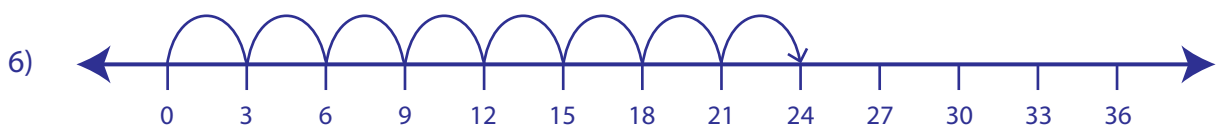
Complete the multiplication equation that describes each model.



$$\square \times 10 = 90$$



$$\square \times 5 = 45$$



$$8 \times \square = 24$$

PREVIEW

Gain complete access to the largest collection of worksheets in all subjects!

Members, please log in to download this worksheet.

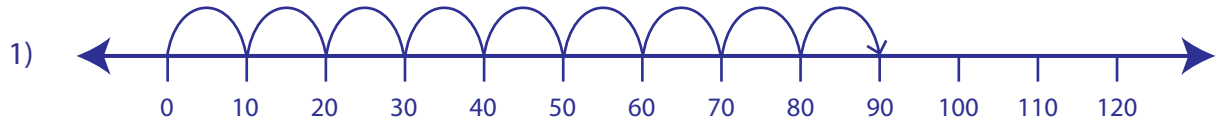
Not a member? Please sign up to gain complete access.

www.mathworksheets4kids.com


Answer Key**Multiplication Sentence - Number Lines**

Complete: 55

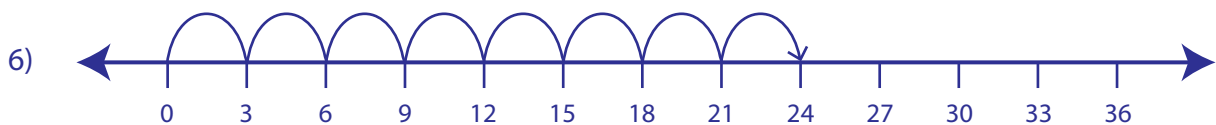
Complete the multiplication equation that describes each model.



$$\boxed{9} \times 10 = 90$$



$$\boxed{9} \times 5 = 45$$



$$8 \times \boxed{3} = 24$$

PREVIEW

Gain complete access to the largest collection of worksheets in all subjects!

Members, please log in to download this worksheet.

Not a member? Please sign up to gain complete access.

www.mathworksheets4kids.com