

Name : _____

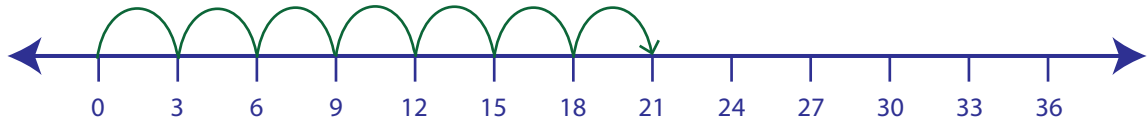
Score : _____

Multiplication Sentence - Number Lines

Hops: 51

Example:

$$7 \times 3 = \underline{21}$$



Draw hops to find the answer to each multiplication sentence.

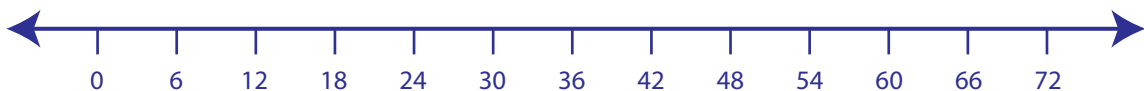
1) $5 \times 2 = \underline{\quad}$



2) $3 \times 4 = \underline{\quad}$



3) $8 \times 6 = \underline{\quad}$



4) $2 \times 7 = \underline{\quad}$



5) $4 \times 9 = \underline{\quad}$

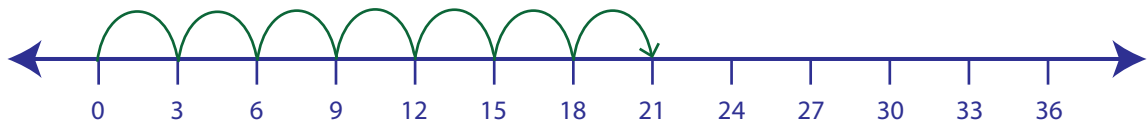


Multiplication Sentence - Number Lines

Hops: 51

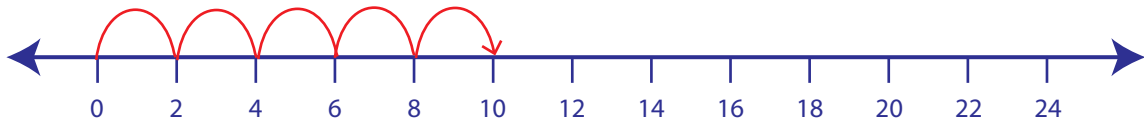
Example:

$7 \times 3 = \underline{21}$

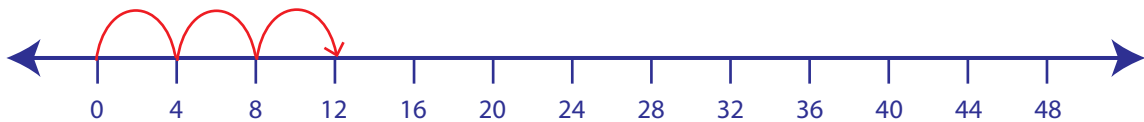


Draw hops to find the answer to each multiplication sentence.

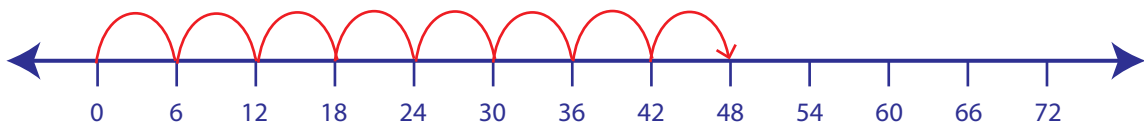
1) $5 \times 2 = \underline{10}$



2) $3 \times 4 = \underline{12}$



3) $8 \times 6 = \underline{48}$



4) $2 \times 7 = \underline{14}$



5) $4 \times 9 = \underline{36}$

