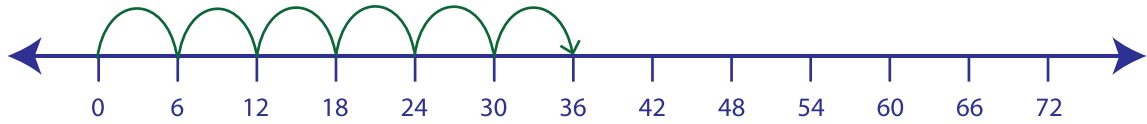


Multiplication Sentence - Number Lines

Hops: 52

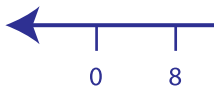
Example:

$$6 \times 6 = \underline{36}$$

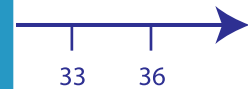
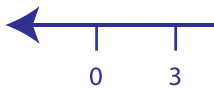


Draw hops to find the answer to each multiplication sentence.

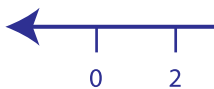
1) $4 \times 8 =$ _____



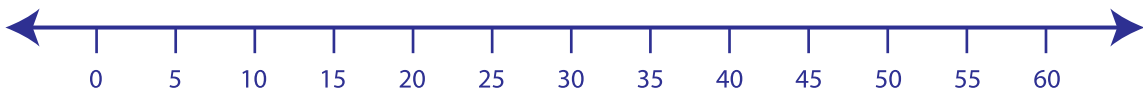
2) $5 \times 3 =$ _____



3) $9 \times 2 =$ _____



4) $6 \times 5 =$ _____



5) $8 \times 7 =$ _____



PREVIEW

Gain complete access to the largest collection of worksheets in all subjects!

Members, please log in to download this worksheet.

Not a member? Please sign up to gain complete access.

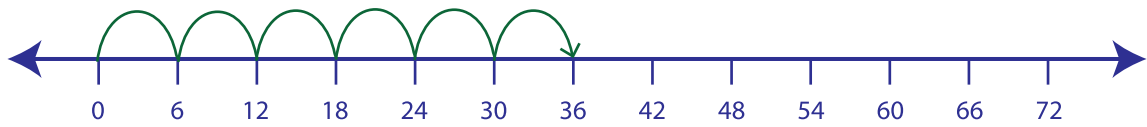
www.mathworksheets4kids.com

Multiplication Sentence - Number Lines

Hops: S2

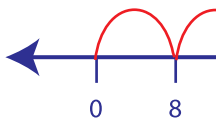
Example:

$6 \times 6 = \underline{36}$

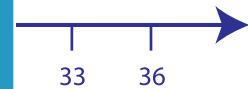
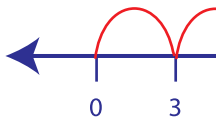


Draw hops to find the answer to each multiplication sentence.

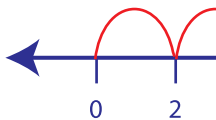
1) $4 \times 8 = \underline{\quad}$



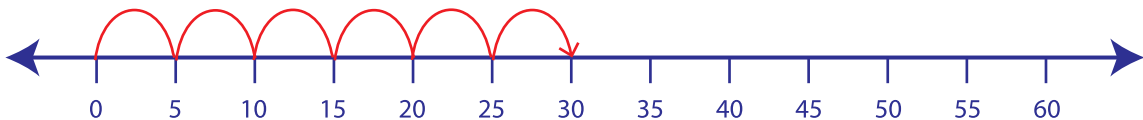
2) $5 \times 3 = \underline{\quad}$



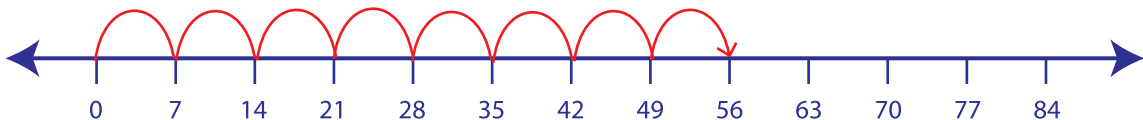
3) $9 \times 2 = \underline{\quad}$



4) $6 \times 5 = \underline{\quad}$



5) $8 \times 7 = \underline{56}$



PREVIEW

Gain complete access to the largest collection of worksheets in all subjects!

Members, please log in to download this worksheet.

Not a member? Please sign up to gain complete access.

www.mathworksheets4kids.com