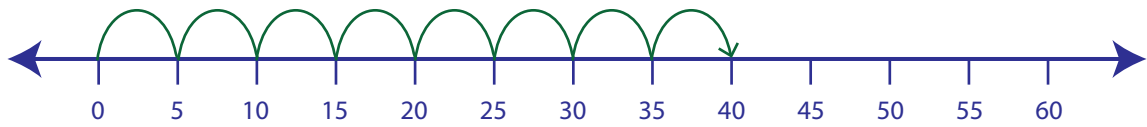


## Multiplication Sentence - Number Lines

Hops: 54

Example:

$$8 \times 5 = \underline{40}$$



Draw hops to find the answer to each multiplication sentence.

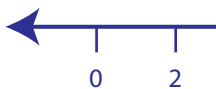
1)  $5 \times 9 =$  \_\_\_\_\_



2)  $3 \times 7 =$  \_\_\_\_\_



3)  $6 \times 2 =$  \_\_\_\_\_



4)  $9 \times 8 =$  \_\_\_\_\_



5)  $10 \times 4 =$  \_\_\_\_\_



# PREVIEW

Gain complete access to the largest collection of worksheets in all subjects!

Members, please log in to download this worksheet.

Not a member? Please sign up to gain complete access.

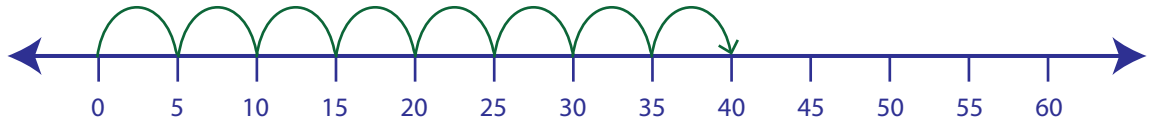
www.mathworksheets4kids.com

**Multiplication Sentence - Number Lines**

Hops: 54

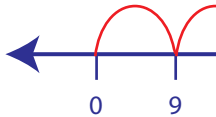
Example:

$8 \times 5 = \underline{40}$

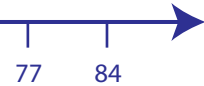
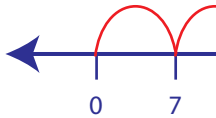


Draw hops to find the answer to each multiplication sentence.

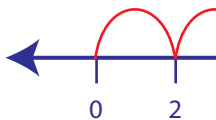
1)  $5 \times 9 = \underline{4}$



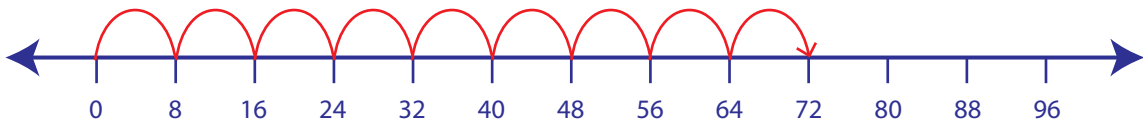
2)  $3 \times 7 = \underline{2}$



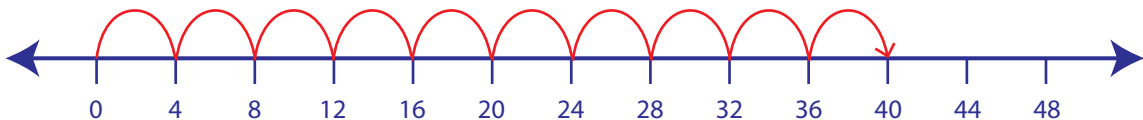
3)  $6 \times 2 = \underline{1}$



4)  $9 \times 8 = \underline{7}$



5)  $10 \times 4 = \underline{40}$

**PREVIEW**

Gain complete access to the largest collection of worksheets in all subjects!

Members, please log in to download this worksheet.

Not a member? Please sign up to gain complete access.

[www.mathworksheets4kids.com](http://www.mathworksheets4kids.com)