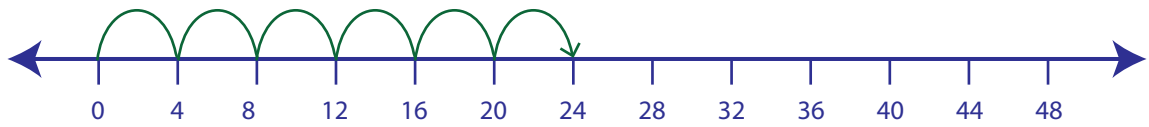


## Multiplication Sentence - Number Lines

Hops: 55

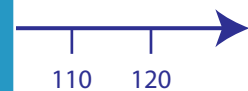
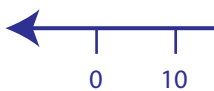
Example:

$$6 \times 4 = \underline{24}$$

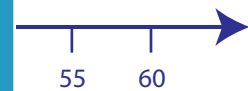
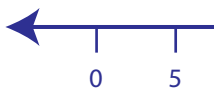


Draw hops to find the answer to each multiplication sentence.

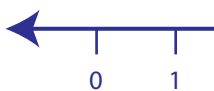
1)  $3 \times 10 =$  \_\_\_\_\_



2)  $2 \times 5 =$  \_\_\_\_\_



3)  $7 \times 1 =$  \_\_\_\_\_



4)  $8 \times 2 =$  \_\_\_\_\_



5)  $3 \times 3 =$  \_\_\_\_\_



# PREVIEW

Gain complete access to the largest collection of worksheets in all subjects!

Members, please log in to download this worksheet.

Not a member? Please sign up to gain complete access.

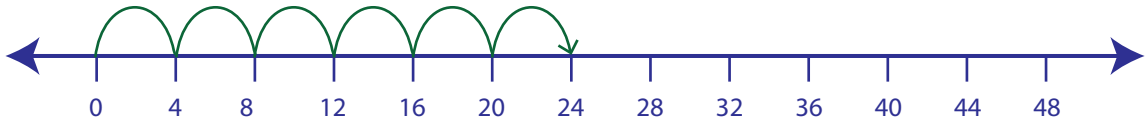
www.mathworksheets4kids.com

**Multiplication Sentence - Number Lines**

Hops: 55

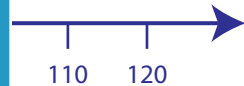
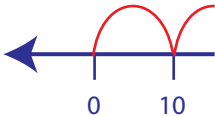
Example:

$6 \times 4 = \underline{24}$

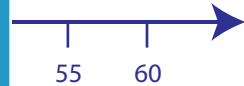
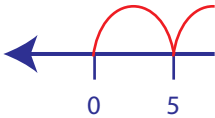


Draw hops to find the answer to each multiplication sentence.

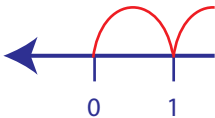
1)  $3 \times 10 = \underline{\quad}$



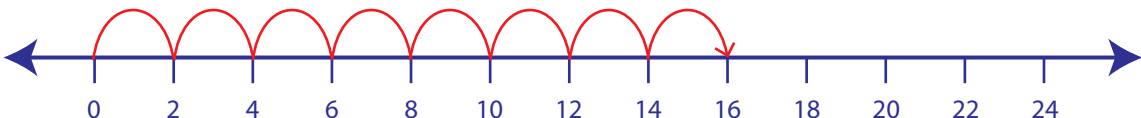
2)  $2 \times 5 = \underline{\quad}$



3)  $7 \times 1 = \underline{\quad}$



4)  $8 \times 2 = \underline{\quad}$



5)  $3 \times 3 = \underline{\quad}$

**PREVIEW**

Gain complete access to the largest collection of worksheets in all subjects!

Members, please log in to download this worksheet.

Not a member? Please sign up to gain complete access.

[www.mathworksheets4kids.com](http://www.mathworksheets4kids.com)