



Multiplication Sentence: Arrays

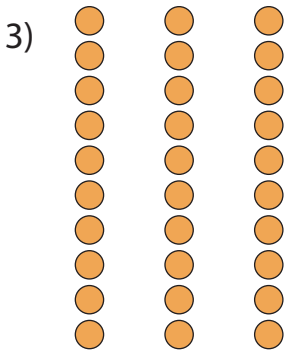
Write a multiplication sentence that describes each array.




_____ × _____



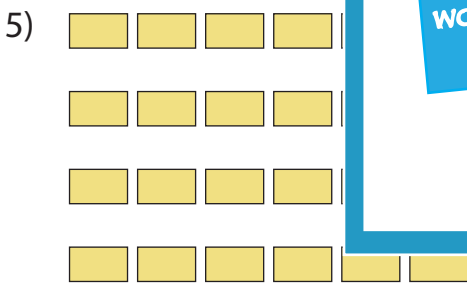
_____ = _____




_____ × _____




_____ = _____



_____ × _____ = _____



_____ × _____ = _____



_____ × _____ = _____

PREVIEW

Gain complete access to the largest collection of worksheets in all subjects!


Members, please log in to download this worksheet.

Not a member? Please sign up to gain complete access.


www.mathworksheets4kids.com

Multiplication Sentence: Arrays

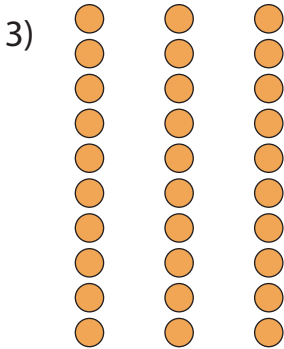
Write a multiplication sentence that describes each array.



$$\underline{6} \times \underline{6}$$



$$\underline{7} = \underline{35}$$



$$\underline{10} \times \underline{4}$$


PREVIEW

Gain complete access to the largest collection of worksheets in all subjects!

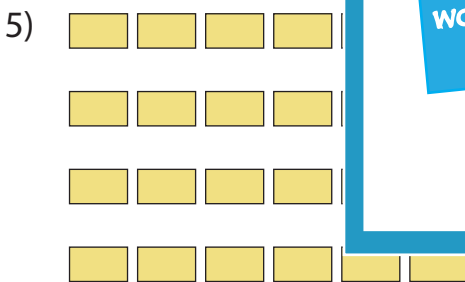
Members, please log in to download this worksheet.

Not a member? Please sign up to gain complete access.


www.mathworksheets4kids.com




$$\underline{8} = \underline{48}$$



$$\underline{4} \times \underline{6} = \underline{24}$$



$$\underline{11} \times \underline{8} = \underline{88}$$



$$\underline{2} \times \underline{10} = \underline{20}$$