


Multiplication Sentence: Arrays

Write a multiplication sentence that describes each array.




_____ × _____ = _____



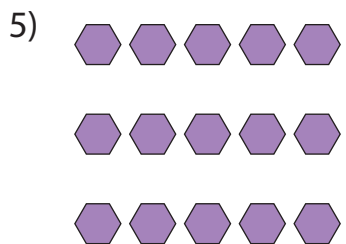
_____ × _____ = _____




_____ × _____ = _____



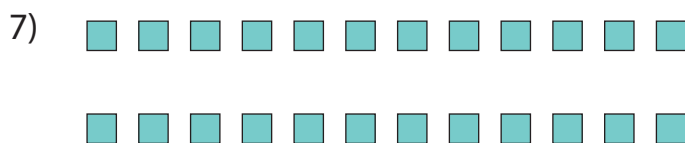
_____ × _____ = _____



_____ × _____ = _____



_____ × _____ = _____



_____ × _____ = _____

PREVIEW

Gain complete access to the largest collection of worksheets in all subjects!

Members, please log in to download this worksheet.

Not a member? Please sign up to gain complete access.


www.mathworksheets4kids.com

Multiplication Sentence: Arrays

Write a multiplication sentence that describes each array.




$$\underline{7} \times \underline{6}$$



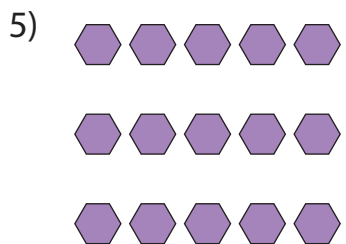
$$\underline{8} = \underline{64}$$



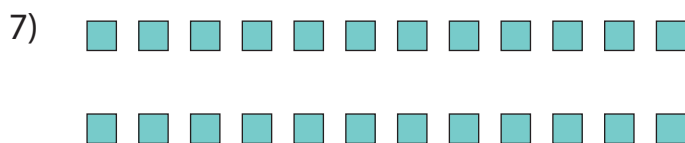
$$\underline{5} \times \underline{3}$$




$$\underline{5} = \underline{20}$$



$$\underline{3} \times \underline{10} = \underline{30}$$



$$\underline{2} \times \underline{12} = \underline{24}$$



$$\underline{11} \times \underline{7} = \underline{77}$$

PREVIEW

Gain complete access to the largest collection of worksheets in all subjects!

Members, please log in to download this worksheet.

Not a member? Please sign up to gain complete access.

www.mathworksheets4kids.com