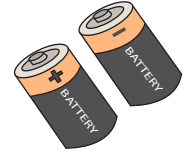


Name : _____

Single Digit Multiplication

Sheet 1


- 1) A flashlight requires 2 batteries to function. How many batteries in all would 7 such flashlights require?




- 2) A CD contains 4 music tracks. How many music tracks would 8 such CDs contain?



- 3) A rectangle is 5 inches long and 4 inches wide. Find the area of the rectangle.
(Area of a rectangle = length*width)



- 4) Norah uses an ounce of butter to bake 9 cookies. How many cookies can she bake with 8 ounces of butter?

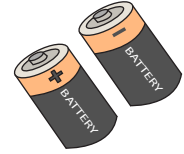


- 5) A tour operator owns a small fleet of 8 cars of the same make. Each car is filled with 2 liters of engine oil. How many liters in all have been filled in the cars?



Single Digit Multiplication

- 1) A flashlight requires 2 batteries to function. How many batteries in all would 7 such flashlights require?




14 batteries

- 2) A CD contains 4 music tracks. How many music tracks would 8 such CDs contain?




32 music tracks

- 3) A rectangle is 5 inches long and 4 inches wide. Find the area of the rectangle.
(Area of a rectangle = length*width)



20 square inches

- 4) Norah uses an ounce of butter to bake 9 cookies. How many cookies can she bake with 8 ounces of butter?



72 cookies

- 5) A tour operator owns a small fleet of 8 cars of the same make. Each car is filled with 2 liters of engine oil. How many liters in all have been filled in the cars?



16 litres
