


Name : \_\_\_\_\_

## 2-Digit by 1-Digit Multiplication


Sheet 2

- 1) John has 8 spare bicycle wheels in his garage. If each wheel has 32 spokes in them, how many spokes do all the wheels have in total?



\_\_\_\_\_

- 2) During the Fourth of July parade, children are made to stand in 10 rows that have 3 columns each. How many children in total are performing at the parade?



\_\_\_\_\_

- 3) Lara requires 8 inches of ribbon. How many inches of ribbon will she require to make 10 bows?

**PREVIEW**  
Gain complete access to the largest collection of worksheets in all subjects!

Members, please log in to download this worksheet.

Not a member? Please sign up to gain complete access.

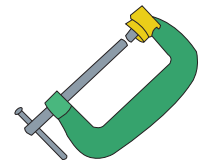
[www.mathworksheets4kids.com](http://www.mathworksheets4kids.com)



\_\_\_\_\_

- 4) Kirk's mansion needs 100 feet of pipe. How many such pipes will he need to lay a water pipe at the mansion?

\_\_\_\_\_



\_\_\_\_\_


- 5) Kylie, Linda and Jack visit a cafe. They buy 3 packs of espresso ground coffee. If each pack costs \$26, how much do they spend on their purchase?



\_\_\_\_\_


**2-Digit by 1-Digit Multiplication**

- 1) John has 8 spare bicycle wheels in his garage. If each wheel has 32 spokes in them, how many spokes do all the wheels have in total?



**256 spokes**

- 2) During the Fourth of July parade, children are made to stand in 10 rows that have 3 columns each. How many children in total are performing at the parade?



**30 children**

- 3) Lara requires 8 inches of ribbon for a project. How many inches of ribbon will she require to complete the project?

**Gain complete access to the largest collection of worksheets in all subjects!**

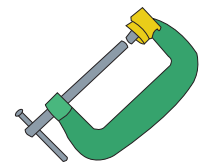
**104 inches of ribbon**



**104 inches**

- 4) Kirk's mansion needs 102 clamps to lay a water pipe. How many such clamps are needed?

**102 clamps**



- 5) Kylie, Linda and Jack visit a cafe. They buy 3 packs of espresso ground coffee. If each pack costs \$26, how much do they spend on their purchase?



**\$78**

**PREVIEW**

Members, please  
log in to  
download this  
worksheet.

Not a member?  
Please sign up to  
gain complete  
access.

[www.mathworksheets4kids.com](http://www.mathworksheets4kids.com)