

Name : _____

3-Digit Multiplication

Sheet 3

- 1) The sales report of a hotel shows a daily average profit of \$399. What will be the average profit made by the hotel from January to June 2016? (2016 is a leap year)



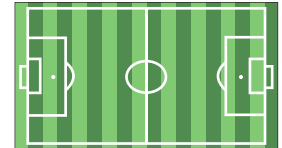
- 2) An Indie- rock band performs in NY city. 789 tickets were sold out. If each ticket was priced at \$101, what was the total collection made?



- 3) A rectangular football field is 100 yards long and 160 feet wide. Calculate the area of the field.

Gain complete access to the largest collection of worksheets in all subjects!

Calculate the area of the field.



- 4) An adult male tiger weighs 300 pounds. How many pounds of food does he eat in a month. How many days?

Members, please log in to download this worksheet.

Not a member? Please sign up to gain complete access.

www.mathworksheets4kids.com

Calculate the weight of the food he eats in a month. How many days?




- 5) A huge plant nursery in Seattle has shrubs arranged in 306 rows. Each row has 416 shrubs. How many shrubs does the nursery hold in all?



3-Digit Multiplication

- 1) The sales report of a hotel shows a daily average profit of \$399. What will be the average profit made by the hotel from January to June 2016? (2016 is a leap year)

\$72,618



- 2) An Indie- rock band performs in NY city. 789 tickets were sold out. If each ticket was priced at \$101, what was the total collection made?

\$79,689



- 3) A rectangular football field is 100 yards long and 60 yards wide. What is the area of the field?

57,600 sq

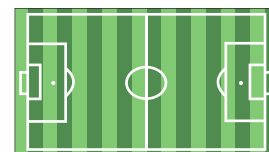
PREVIEW
Gain complete access to the largest collection of worksheets in all subjects!

Members, please log in to download this worksheet.

Not a member? Please sign up to gain complete access.

www.mathworksheets4kids.com

es 160 feet, calculate



- 4) An adult male tiger weighs 435.6 pounds. How many pounds of food does he eat in a month. How many days?

43,560 pounds

in a month. How many days?



- 5) A huge plant nursery in Seattle has shrubs arranged in 306 rows. Each row has 416 shrubs. How many shrubs does the nursery hold in all?

127,296 shrubs

