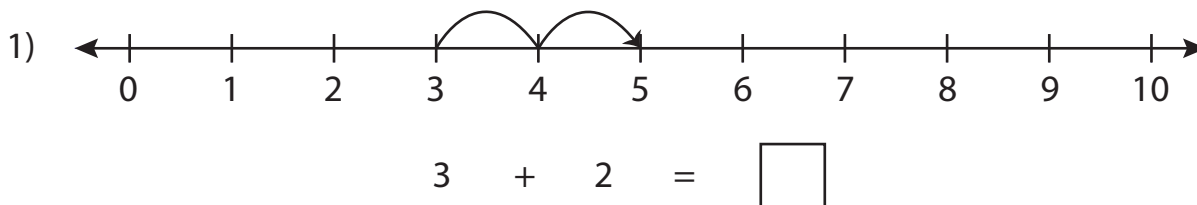


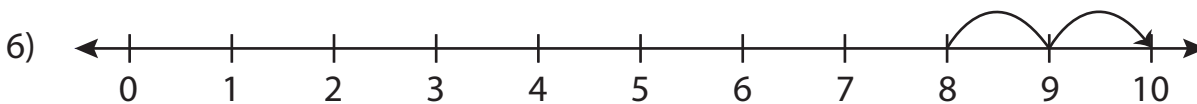
# Number Line Addition

0-10: S3

Read each number line and solve the problem.



$$4 + 1 = \square$$



$$8 + 2 = \square$$

## PREVIEW

Gain complete access to the largest  
collection of worksheets in all subjects!

Members, please  
log in to  
download this  
worksheet.

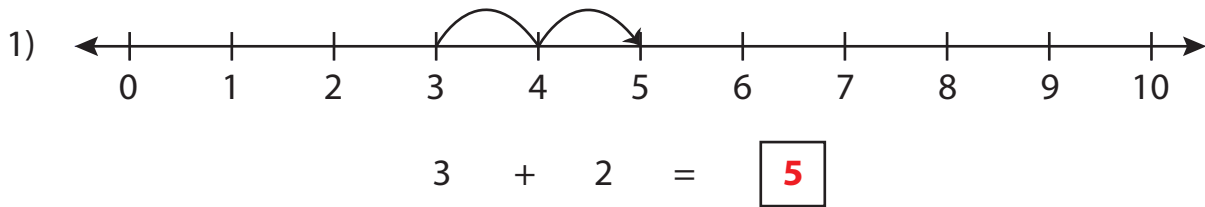
Not a member?  
Please sign up to  
gain complete  
access.

[www.mathworksheets4kids.com](http://www.mathworksheets4kids.com)

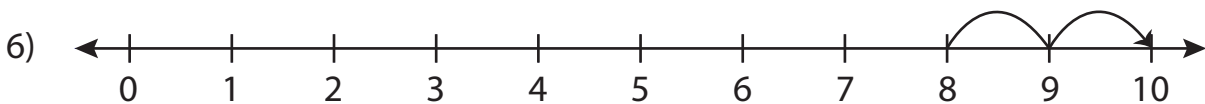
# Number Line Addition

0-10: S3

Read each number line and solve the problem.



$$4 + 1 = \boxed{5}$$



$$8 + 2 = \boxed{10}$$

**PREVIEW**

Gain complete access to the largest collection of worksheets in all subjects!

Members, please log in to download this worksheet.

Not a member? Please sign up to gain complete access.

[www.mathworksheets4kids.com](http://www.mathworksheets4kids.com)