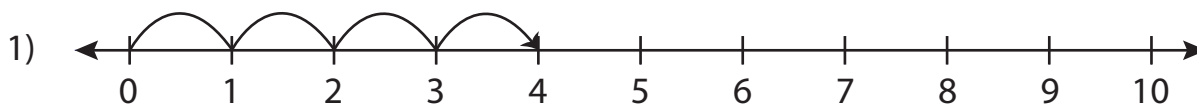


# Number Line Addition

0-10: S4

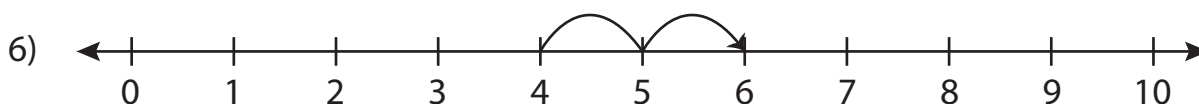
Read each number line and solve the problem.



$$0 + 4 = \square$$



$$2 + 5 = \square$$



$$4 + 2 = \square$$

## PREVIEW

Gain complete access to the largest collection of worksheets in all subjects!

Members, please log in to download this worksheet.

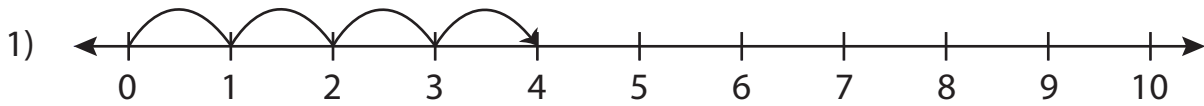
Not a member? Please sign up to gain complete access.

www.mathworksheets4kids.com

# Number Line Addition

0-10: S4

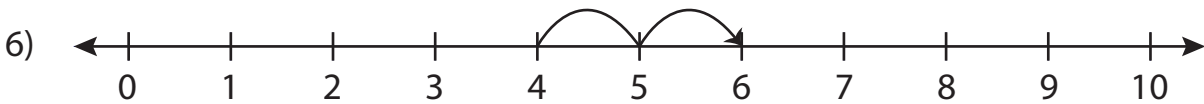
Read each number line and solve the problem.



$$0 + 4 = \boxed{4}$$



$$2 + 5 = \boxed{7}$$



$$4 + 2 = \boxed{6}$$

# PREVIEW

Gain complete access to the largest collection of worksheets in all subjects!

Members, please log in to download this worksheet.

Not a member? Please sign up to gain complete access.

[www.mathworksheets4kids.com](http://www.mathworksheets4kids.com)