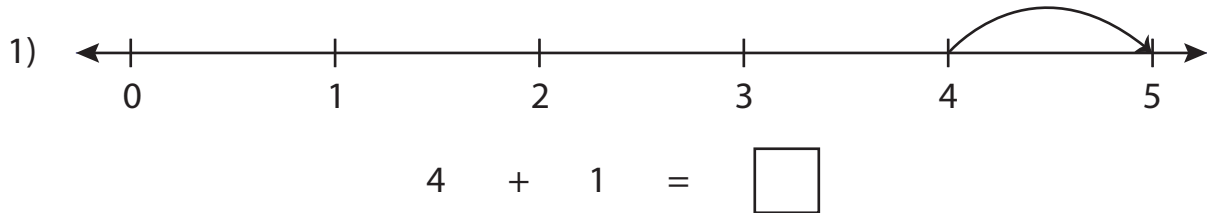


Number Line Addition

0-5: S3

Read each number line and solve the problem.



$0 + 2 = \square$



$3 + 1 = \square$

PREVIEW

Gain complete access to the largest collection of worksheets in all subjects!

Members, please log in to download this worksheet.

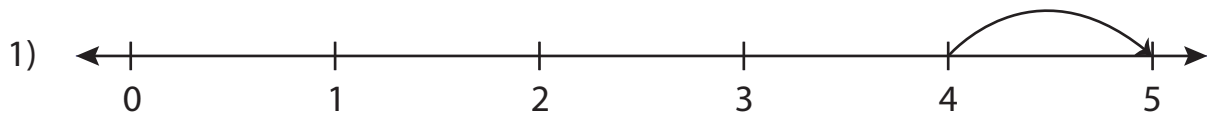
Not a member? Please sign up to gain complete access.

www.mathworksheets4kids.com

Number Line Addition

0-5: S3

Read each number line and solve the problem.



$$4 + 1 = \boxed{5}$$



PREVIEW

Gain complete access to the largest
collection of worksheets in all subjects!


Members, please
log in to
download this
worksheet.

Not a member?
Please sign up to
gain complete
access.

www.mathworksheets4kids.com



$$0 + 2 = \boxed{2}$$



$$3 + 1 = \boxed{4}$$