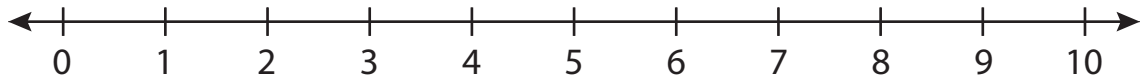


# Number Line Addition

0-10: S1

Indicate hops on each number line and complete the addition sentences.

1)  $5 + 3 =$  \_\_\_\_\_



2)  $2 + 4 =$  \_\_\_\_\_



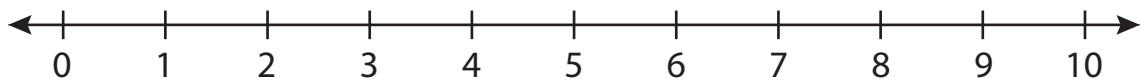
3)  $0 + 6 =$  \_\_\_\_\_



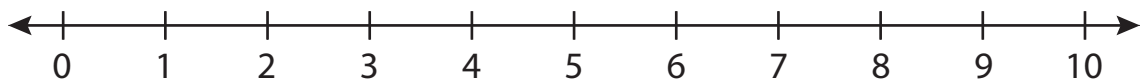
4)  $3 + 6 =$  \_\_\_\_\_



5)  $8 + 1 =$  \_\_\_\_\_



6)  $6 + 2 =$  \_\_\_\_\_



**PREVIEW**

Gain complete access to the largest collection of worksheets in all subjects!

Members, please log in to download this worksheet.

Not a member? Please sign up to gain complete access.

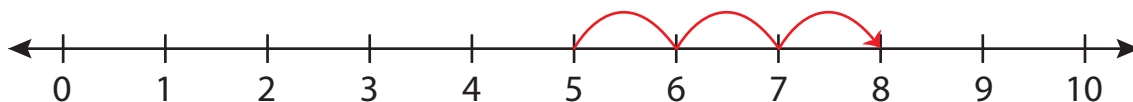
[www.mathworksheets4kids.com](http://www.mathworksheets4kids.com)

**Number Line Addition**

0-10: S1

Indicate hops on each number line and complete the addition sentences.

1)  $5 + 3 = \underline{8}$



2)  $2 + 4 =$



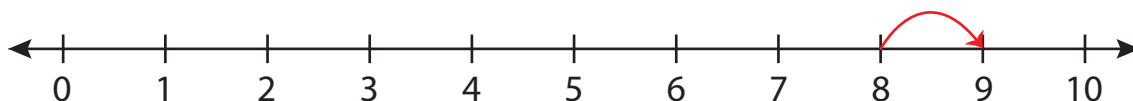
3)  $0 + 6 =$



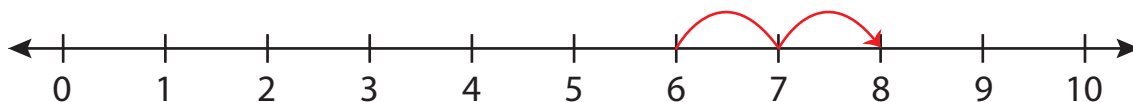
4)  $3 + 6 =$



5)  $8 + 1 =$



6)  $6 + 2 = \underline{8}$



**PREVIEW**

Gain complete access to the largest collection of worksheets in all subjects!

Members, please log in to download this worksheet.

Not a member? Please sign up to gain complete access.

[www.mathworksheets4kids.com](http://www.mathworksheets4kids.com)