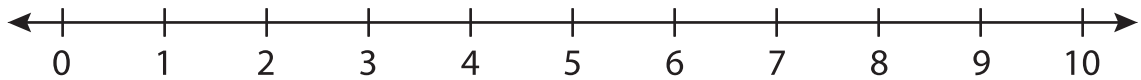


Number Line Addition

0-10: S2

Indicate hops on each number line and complete the addition sentences.

1) $1 + 6 =$ _____



2) $4 + 2 =$



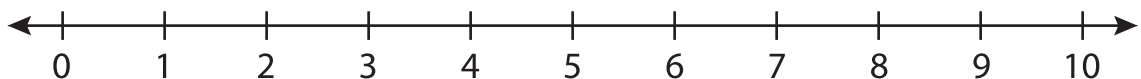
3) $5 + 4 =$



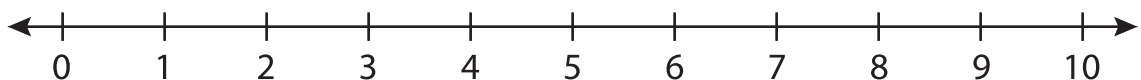
4) $0 + 3 =$



5) $7 + 1 =$



6) $2 + 5 =$ _____



PREVIEW

Gain complete access to the largest collection of worksheets in all subjects!

Members, please log in to download this worksheet.

Not a member? Please sign up to gain complete access.

www.mathworksheets4kids.com