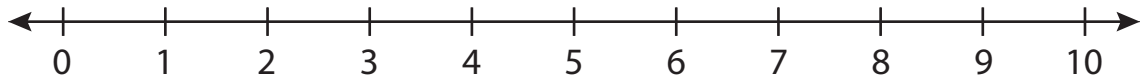


Number Line Addition

0-10: S3

Indicate hops on each number line and complete the addition sentences.

1) $3 + 7 =$ _____



2) $2 + 3 =$ _____



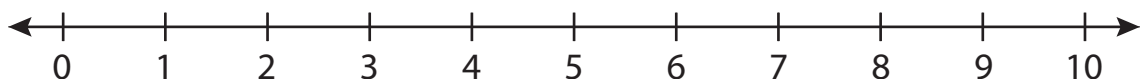
3) $4 + 5 =$ _____



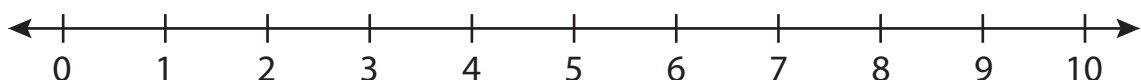
4) $1 + 8 =$ _____



5) $6 + 4 =$ _____



6) $9 + 1 =$ _____

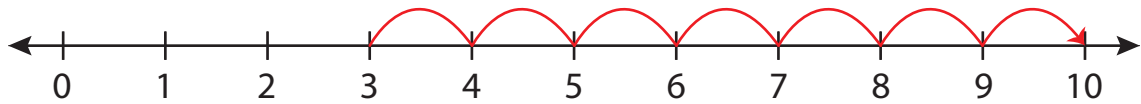


Number Line Addition

0-10: S3

Indicate hops on each number line and complete the addition sentences.

1) $3 + 7 =$ 10



2) $2 + 3 =$ _____



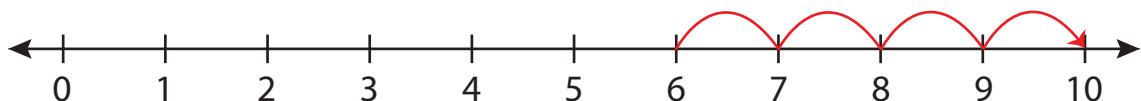
3) $4 + 5 =$ _____



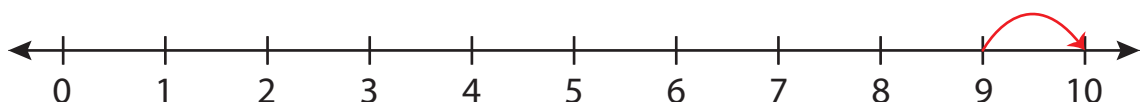
4) $1 + 8 =$ _____



5) $6 + 4 =$ _____



6) $9 + 1 =$ 10



PREVIEW

Gain complete access to the largest collection of worksheets in all subjects!

Members, please log in to download this worksheet.

Not a member? Please sign up to gain complete access.

www.mathworksheets4kids.com