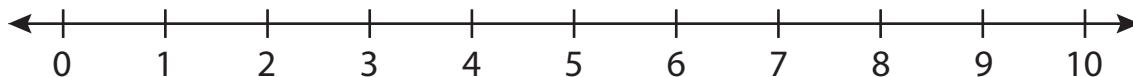


Number Line Addition

0-10: S4

Indicate hops on each number line and complete the addition sentences.

1) $3 + 3 =$ _____



2) $4 + 6 =$



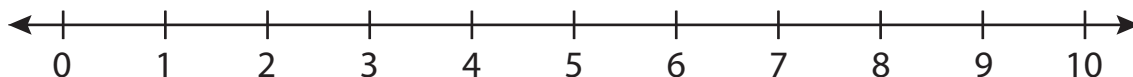
3) $5 + 2 =$



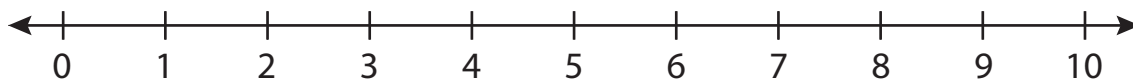
4) $0 + 1 =$



5) $2 + 7 =$



6) $1 + 5 =$ _____



PREVIEW

Gain complete access to the largest collection of worksheets in all subjects!

Members, please log in to download this worksheet.

Not a member? Please sign up to gain complete access.

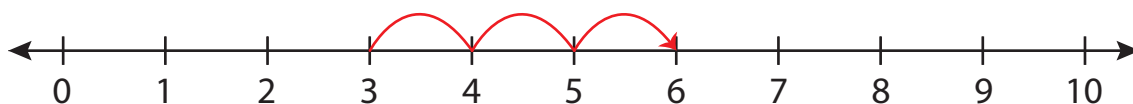
www.mathworksheets4kids.com

Number Line Addition

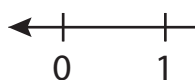
0-10: S4

Indicate hops on each number line and complete the addition sentences.

1) $3 + 3 =$ 6



2) $4 + 6 =$



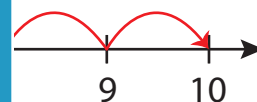
PREVIEW

Gain complete access to the largest
collection of worksheets in all subjects!

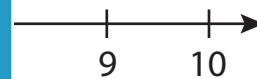
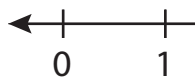
Members, please
log in to
download this
worksheet.

Not a member?
Please sign up to
gain complete
access.

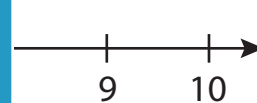
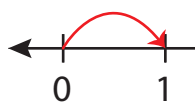
www.mathworksheets4kids.com



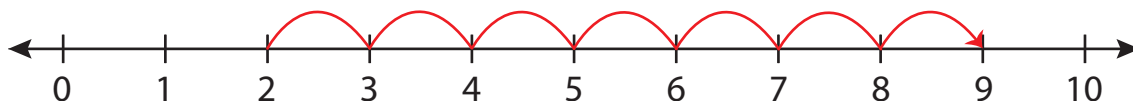
3) $5 + 2 =$



4) $0 + 1 =$



5) $2 + 7 =$



6) $1 + 5 =$ 6

