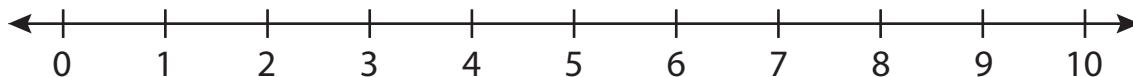


# Number Line Addition

0-10: S5

Indicate hops on each number line and complete the addition sentences.

1)  $2 + 2 =$  \_\_\_\_\_



2)  $6 + 3 =$



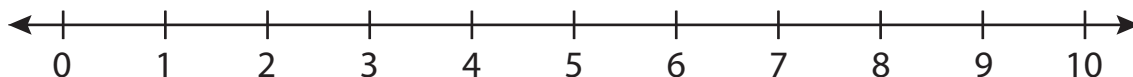
3)  $3 + 1 =$



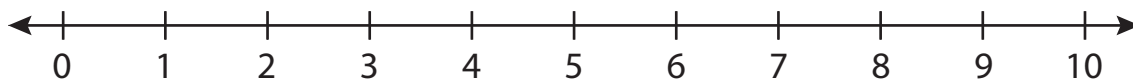
4)  $5 + 5 =$



5)  $0 + 4 =$



6)  $1 + 7 =$  \_\_\_\_\_



**PREVIEW**

Gain complete access to the largest collection of worksheets in all subjects!

Members, please log in to download this worksheet.

Not a member? Please sign up to gain complete access.

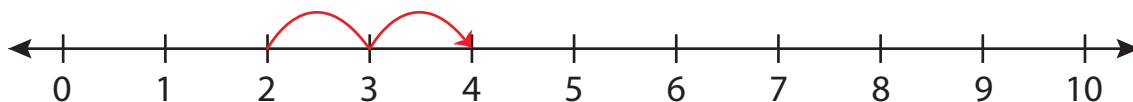
[www.mathworksheets4kids.com](http://www.mathworksheets4kids.com)

# Number Line Addition

0-10: S5

Indicate hops on each number line and complete the addition sentences.

1)  $2 + 2 =$  4



2)  $6 + 3 =$



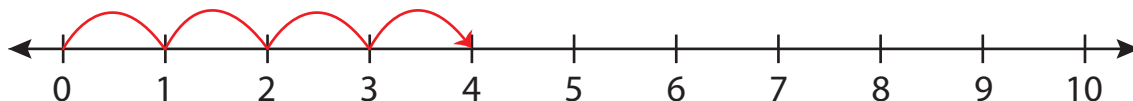
3)  $3 + 1 =$



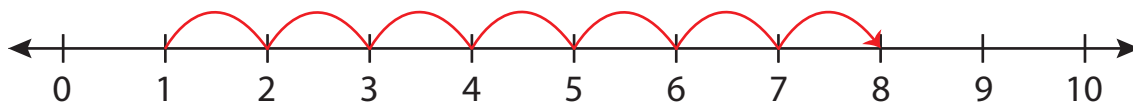
4)  $5 + 5 =$



5)  $0 + 4 =$



6)  $1 + 7 =$  8



## PREVIEW

Gain complete access to the largest collection of worksheets in all subjects!

Members, please log in to download this worksheet.

Not a member? Please sign up to gain complete access.

www.mathworksheets4kids.com