

Number Line Addition


0-5: S1

Indicate hops on each number line and complete the addition sentences.


1) $2 + 2 =$ _____



2) $1 + 2 =$ _____




3) $4 + 1 =$ _____



4) $0 + 3 =$ _____



5) $3 + 2 =$ _____



6) $2 + 1 =$ _____

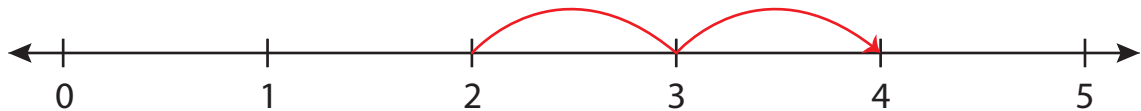


Number Line Addition

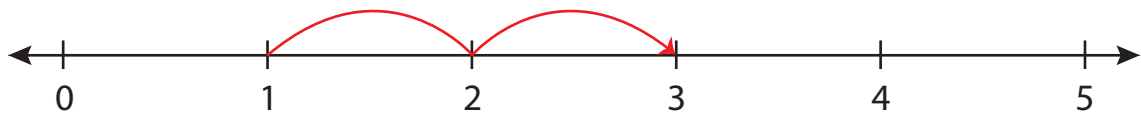
0-5: S1

Indicate hops on each number line and complete the addition sentences.


1) $2 + 2 = \underline{4}$



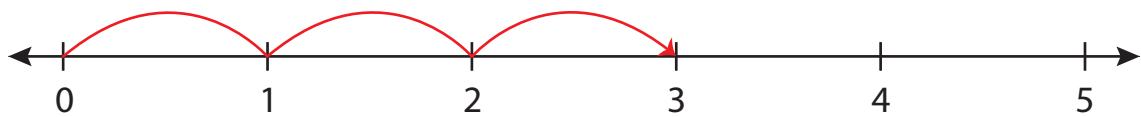
2) $1 + 2 = \underline{3}$




3) $4 + 1 = \underline{5}$



4) $0 + 3 = \underline{3}$



5) $3 + 2 = \underline{5}$



6) $2 + 1 = \underline{3}$

