


Number Line Addition

0-5: S3

Indicate hops on each number line and complete the addition sentences.

1) $1 + 2 =$ _____



2) $0 + 4 =$ _____




3) $3 + 1 =$ _____




4) $2 + 3 =$ _____



5) $4 + 1 =$ _____



6) $0 + 5 =$ _____



PREVIEW

Gain complete access to the largest collection of worksheets in all subjects!

Members, please log in to download this worksheet.

Not a member? Please sign up to gain complete access.

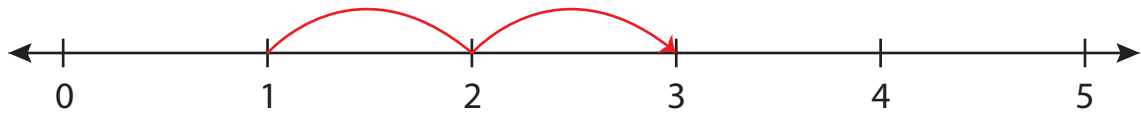
www.mathworksheets4kids.com

Number Line Addition

0-5: S3

Indicate hops on each number line and complete the addition sentences.

1) $1 + 2 = \underline{3}$



2) $0 + 4 = \underline{4}$




3) $3 + 1 = \underline{4}$



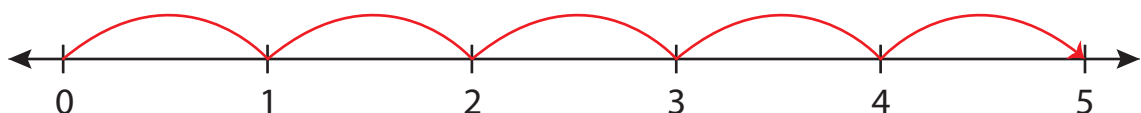
4) $2 + 3 = \underline{5}$



5) $4 + 1 = \underline{5}$



6) $0 + 5 = \underline{5}$



PREVIEW

Gain complete access to the largest collection of worksheets in all subjects!

Members, please log in to download this worksheet.

Not a member? Please sign up to gain complete access.

www.mathworksheets4kids.com