

Number Line Addition

0-5: S4

Indicate hops on each number line and complete the addition sentences.

1) $4 + 1 =$ _____



2) $0 + 5 =$ _____




3) $1 + 2 =$ _____




4) $3 + 1 =$ _____



5) $2 + 2 =$ _____



6) $2 + 3 =$ _____



PREVIEW

Gain complete access to the largest collection of worksheets in all subjects!

Members, please log in to download this worksheet.

Not a member? Please sign up to gain complete access.


www.mathworksheets4kids.com

Number Line Addition

0-5: S4

Indicate hops on each number line and complete the addition sentences.

1) $4 + 1 = \underline{5}$



2) $0 + 5 = \underline{5}$



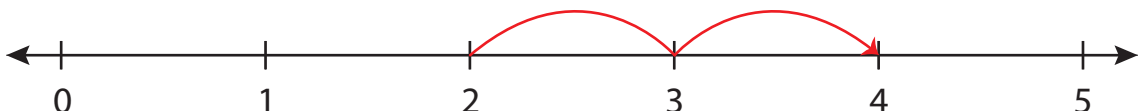
3) $1 + 2 =$



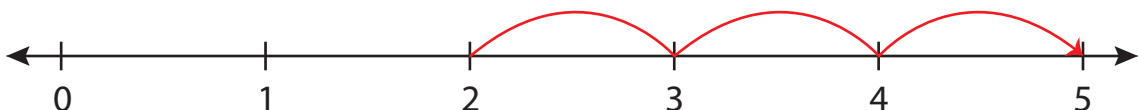
4) $3 + 1 =$



5) $2 + 2 =$



6) $2 + 3 = \underline{5}$



PREVIEW

Gain complete access to the largest collection of worksheets in all subjects!

Members, please log in to download this worksheet.

Not a member? Please sign up to gain complete access.

www.mathworksheets4kids.com