


# Number Line Addition

0-5: S5

Indicate hops on each number line and complete the addition sentences.

1)  $3 + 1 =$  \_\_\_\_\_



2)  $2 + 3 =$  \_\_\_\_\_




3)  $0 + 1 =$  \_\_\_\_\_




4)  $2 + 2 =$  \_\_\_\_\_



5)  $1 + 3 =$  \_\_\_\_\_



6)  $0 + 2 =$  \_\_\_\_\_



**PREVIEW**

Gain complete access to the largest collection of worksheets in all subjects!

Members, please log in to download this worksheet.

Not a member? Please sign up to gain complete access.

[www.mathworksheets4kids.com](http://www.mathworksheets4kids.com)

# Number Line Addition

0-5: S5

Indicate hops on each number line and complete the addition sentences.

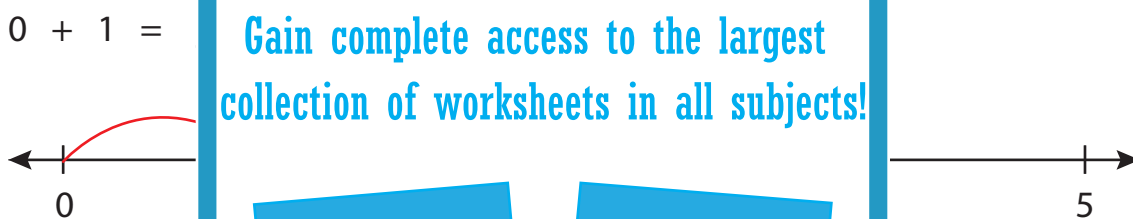
1)  $3 + 1 = \underline{4}$



2)  $2 + 3 = \underline{5}$



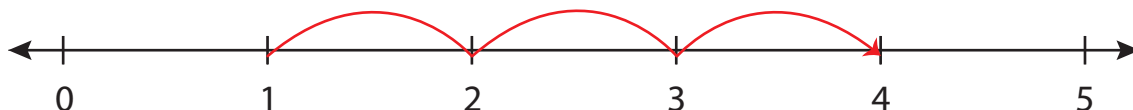
3)  $0 + 1 =$



4)  $2 + 2 =$



5)  $1 + 3 =$



6)  $0 + 2 = \underline{2}$

