

Name : _____

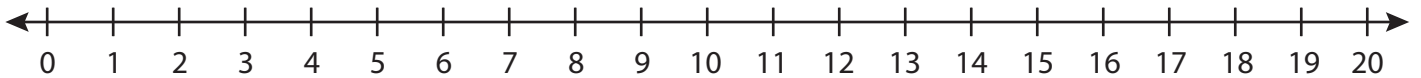
Score : _____

Number Line Addition

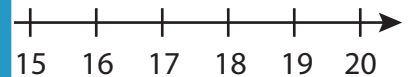
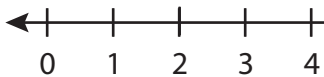
Three addends: S1

Indicate hops on each number line and complete the addition sentences.

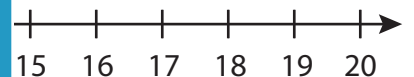
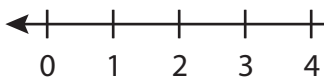
1) $9 + 1 + 3 =$ _____



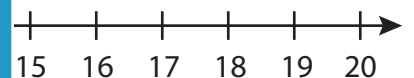
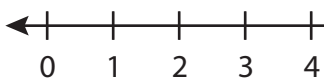
2) $13 + 4 + 1 =$ _____



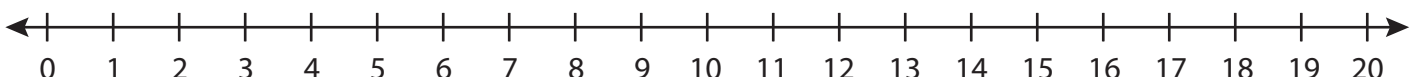
3) $7 + 3 + 10 =$ _____



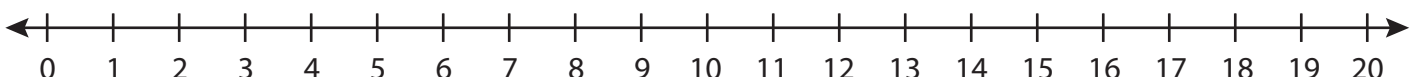
4) $3 + 12 + 2 =$ _____



5) $2 + 4 + 9 =$ _____



6) $1 + 7 + 8 =$ _____



PREVIEW

Gain complete access to the largest collection of worksheets in all subjects!

Members, please log in to download this worksheet.

Not a member? Please sign up to gain complete access.

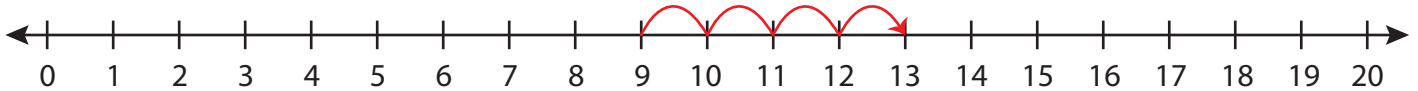
www.mathworksheets4kids.com

Number Line Addition

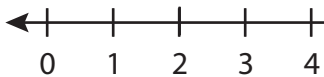
Three addends: S1

Indicate hops on each number line and complete the addition sentences.

1) $9 + 1 + 3 =$ 13



2) $13 + 4 + 1 =$



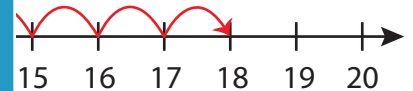
PREVIEW

Gain complete access to the largest
collection of worksheets in all subjects!

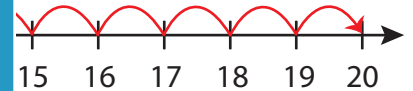
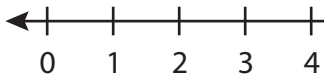
Members, please
log in to
download this
worksheet.

Not a member?
Please sign up to
gain complete
access.

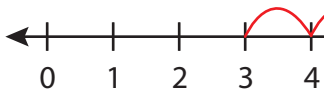
www.mathworksheets4kids.com



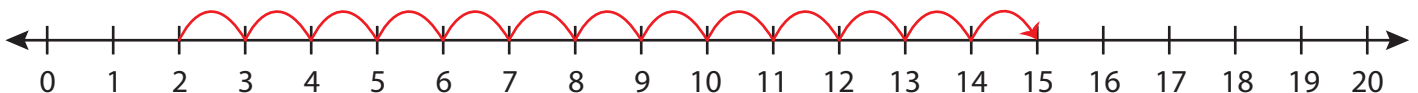
3) $7 + 3 + 10 =$



4) $3 + 12 + 2 =$



5) $2 + 4 + 9 =$



6) $1 + 7 + 8 =$ 16

