

Name : \_\_\_\_\_

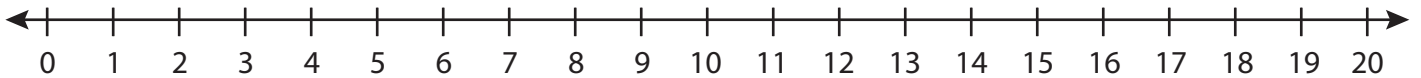
Score : \_\_\_\_\_

## Number Line Addition

Three addends: S2

Indicate hops on each number line and complete the addition sentences.

1)  $6 + 3 + 5 =$  \_\_\_\_\_



2)  $11 + 6 + 3 =$  \_\_\_\_\_



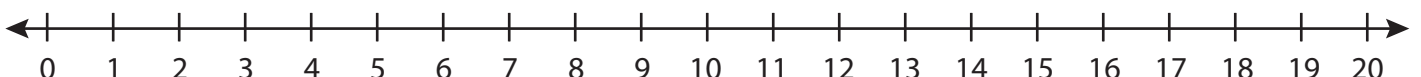
3)  $1 + 5 + 7 =$  \_\_\_\_\_



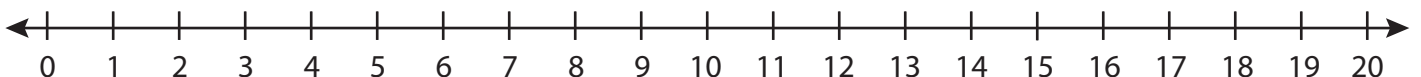
4)  $5 + 4 + 6 =$  \_\_\_\_\_



5)  $6 + 2 + 1 =$  \_\_\_\_\_



6)  $2 + 13 + 3 =$  \_\_\_\_\_



**PREVIEW**

Gain complete access to the largest collection of worksheets in all subjects!

Members, please log in to download this worksheet.

Not a member? Please sign up to gain complete access.

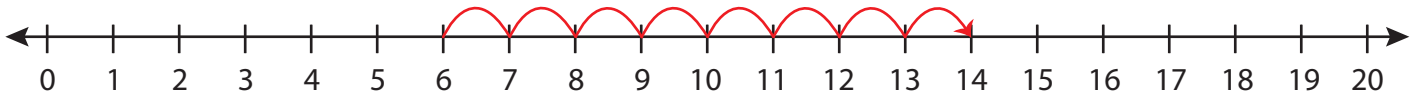
[www.mathworksheets4kids.com](http://www.mathworksheets4kids.com)

# Number Line Addition

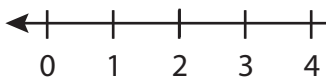
Three addends: S2

Indicate hops on each number line and complete the addition sentences.

1)  $6 + 3 + 5 =$  14



2)  $11 + 6 + 3 =$



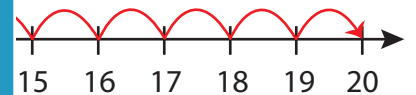
# PREVIEW

Gain complete access to the largest collection of worksheets in all subjects!

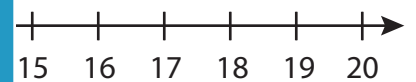
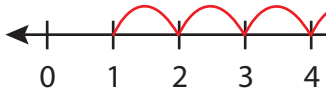
Members, please log in to download this worksheet.

Not a member? Please sign up to gain complete access.

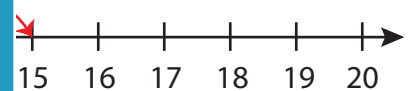
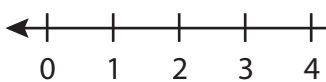
[www.mathworksheets4kids.com](http://www.mathworksheets4kids.com)



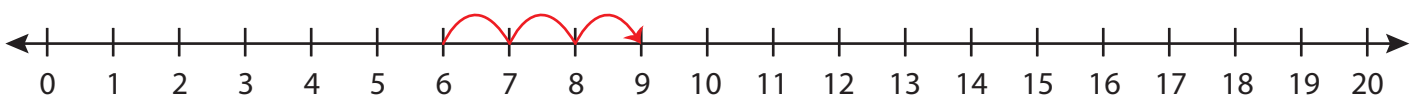
3)  $1 + 5 + 7 =$



4)  $5 + 4 + 6 =$



5)  $6 + 2 + 1 =$



6)  $2 + 13 + 3 =$  18

