

Name : _____

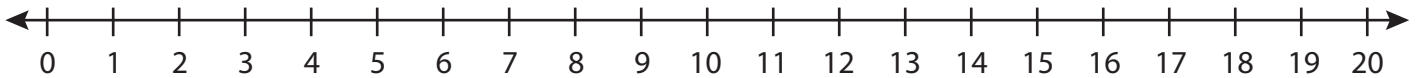
Score : _____

Number Line Addition

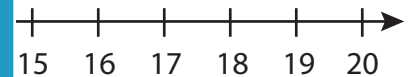
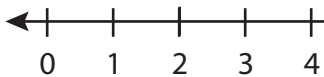
Three addends: S3

Indicate hops on each number line and complete the addition sentences.

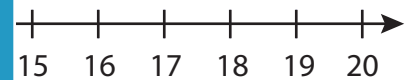
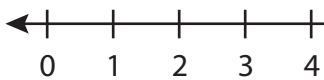
1) $8 + 2 + 5 =$ _____



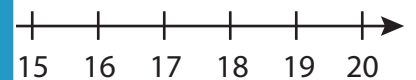
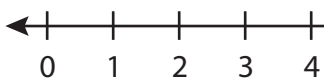
2) $6 + 4 + 2 =$ _____



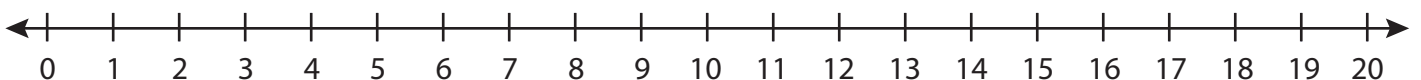
3) $15 + 2 + 3 =$ _____



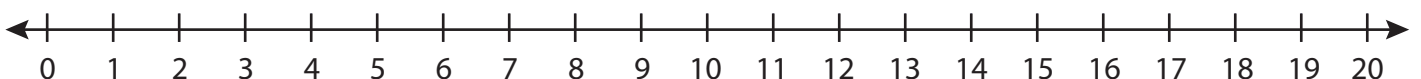
4) $3 + 14 + 1 =$ _____



5) $2 + 3 + 8 =$ _____



6) $9 + 1 + 6 =$ _____



PREVIEW

Gain complete access to the largest collection of worksheets in all subjects!

Members, please log in to download this worksheet.

Not a member? Please sign up to gain complete access.

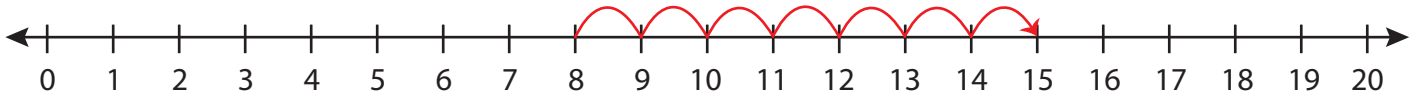
www.mathworksheets4kids.com

Number Line Addition

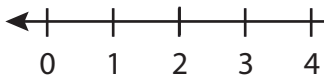
Three addends: S3

Indicate hops on each number line and complete the addition sentences.

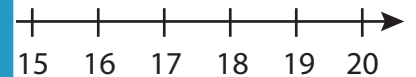
1) $8 + 2 + 5 =$ 15



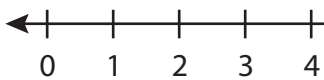
2) $6 + 4 + 2 =$



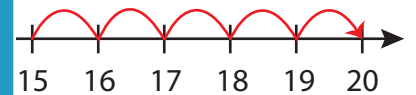
PREVIEW



3) $15 + 2 + 3 =$



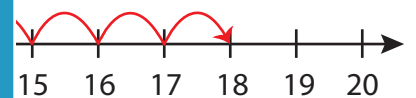
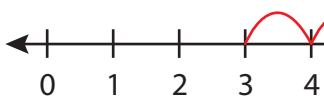
Gain complete access to the largest collection of worksheets in all subjects!



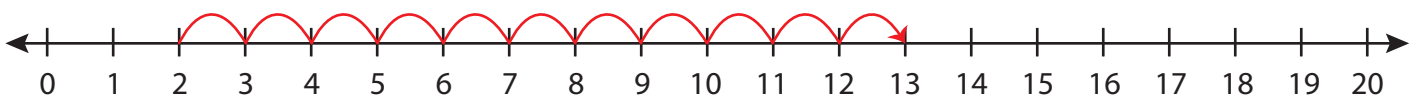
Members, please log in to download this worksheet.

Not a member? Please sign up to gain complete access.

4) $3 + 14 + 1 =$



5) $2 + 3 + 8 =$



6) $9 + 1 + 6 =$ 16

