

Name : \_\_\_\_\_

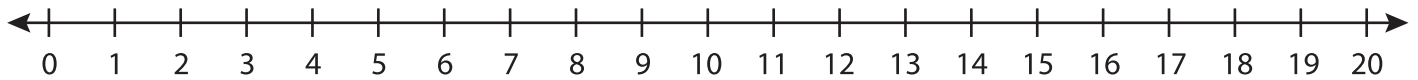
Score : \_\_\_\_\_

## Number Line Addition

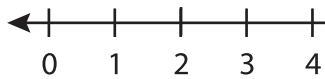
Three addends: S4

Indicate hops on each number line and complete the addition sentences.

1)  $7 + 8 + 2 =$  \_\_\_\_\_



2)  $16 + 2 + 1 =$  \_\_\_\_\_



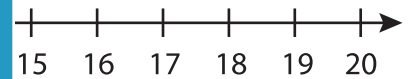
# PREVIEW

Gain complete access to the largest  
collection of worksheets in all subjects!

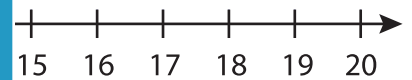
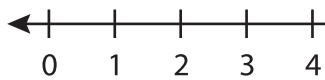
Members, please  
log in to  
download this  
worksheet.

Not a member?  
Please sign up to  
gain complete  
access.

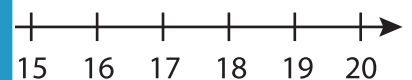
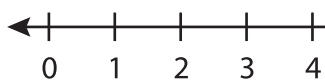
[www.mathworksheets4kids.com](http://www.mathworksheets4kids.com)



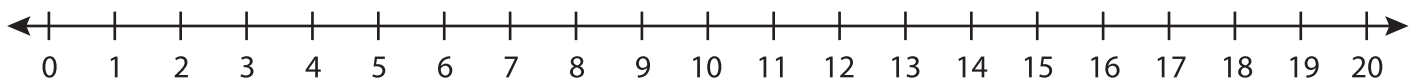
3)  $5 + 4 + 3 =$  \_\_\_\_\_



4)  $3 + 9 + 2 =$  \_\_\_\_\_



5)  $6 + 5 + 7 =$  \_\_\_\_\_



6)  $4 + 11 + 1 =$  \_\_\_\_\_

