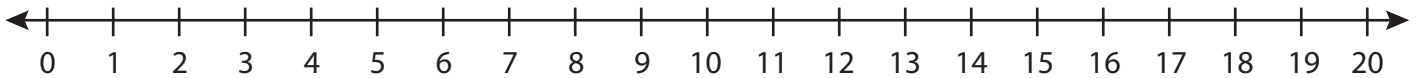


Number Line Addition

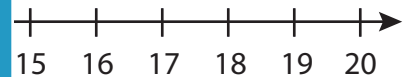
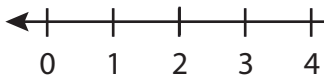
Three addends: S5

Indicate hops on each number line and complete the addition sentences.

1) $12 + 4 + 3 =$ _____



2) $13 + 1 + 2 =$ _____



PREVIEW

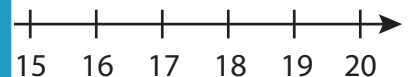
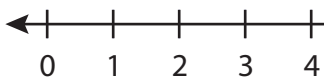
Gain complete access to the largest
collection of worksheets in all subjects!

Members, please
log in to
download this
worksheet.

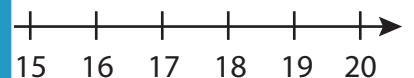
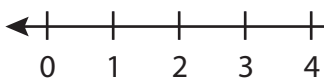
Not a member?
Please sign up to
gain complete
access.

www.mathworksheets4kids.com

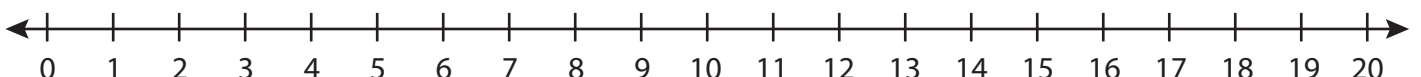
3) $2 + 2 + 11 =$ _____



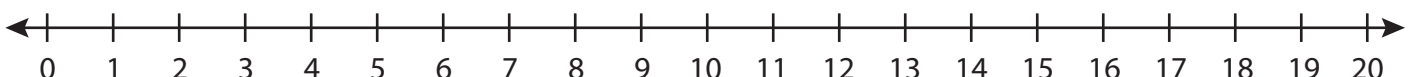
4) $1 + 15 + 2 =$ _____



5) $4 + 9 + 1 =$ _____



6) $8 + 6 + 3 =$ _____

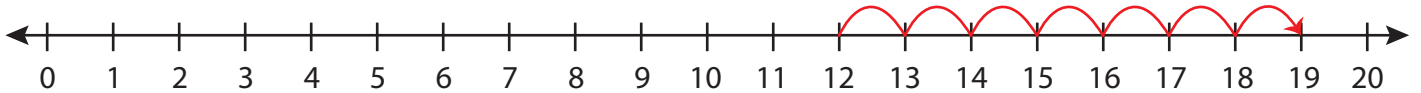


Number Line Addition

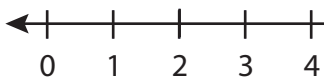
Three addends: S5

Indicate hops on each number line and complete the addition sentences.

1) $12 + 4 + 3 =$ 19



2) $13 + 1 + 2 =$



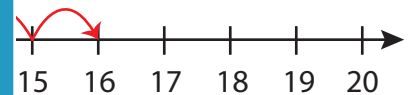
PREVIEW

Gain complete access to the largest
collection of worksheets in all subjects!

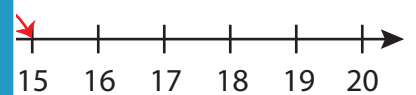
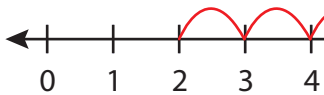
Members, please
log in to
download this
worksheet.

Not a member?
Please sign up to
gain complete
access.

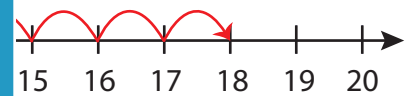
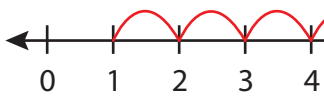
www.mathworksheets4kids.com



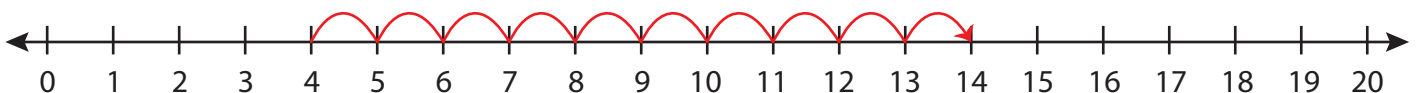
3) $2 + 2 + 11 =$



4) $1 + 15 + 2 =$



5) $4 + 9 + 1 =$



6) $8 + 6 + 3 =$ 17

