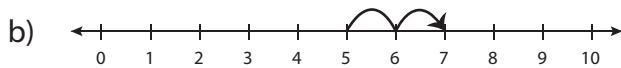
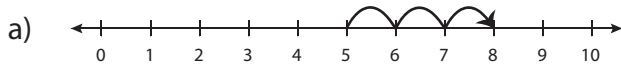


Number Line Addition - MCQ

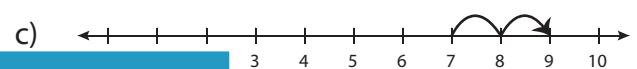
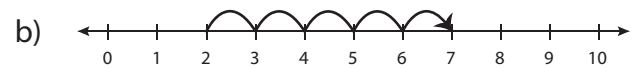
Sheet 1

Identify the correct number line for each addition sentence.

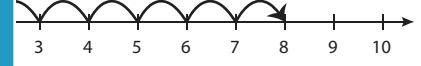
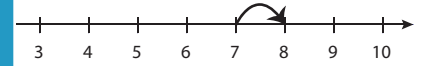
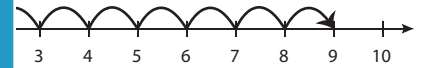
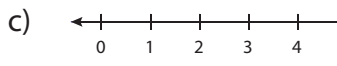
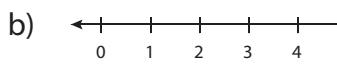
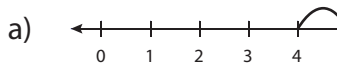
1) $5 + 3 = 8$



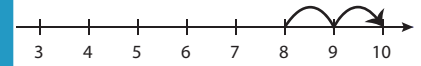
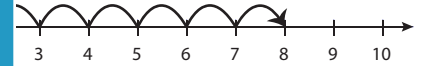
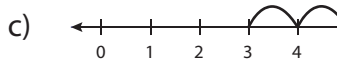
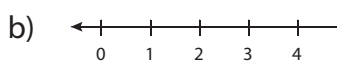
2) $7 + 2 = 9$



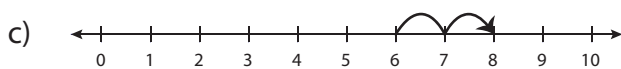
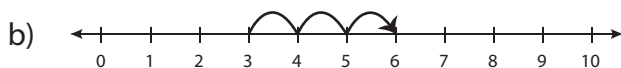
3) $6 + 4 = 10$



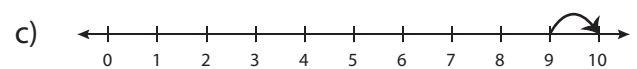
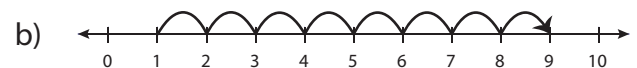
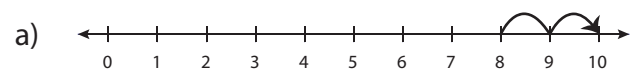
5) $3 + 3 = 6$



7) $4 + 2 = 6$



8) $9 + 1 = 10$



PREVIEW

Gain complete access to the largest collection of worksheets in all subjects!

Members, please log in to download this worksheet.

Not a member? Please sign up to gain complete access.

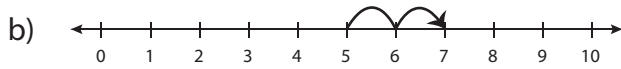
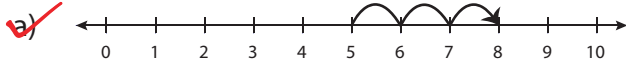
www.mathworksheets4kids.com

Answer key**Number Line Addition - MCQ**

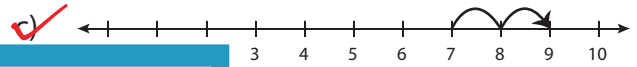
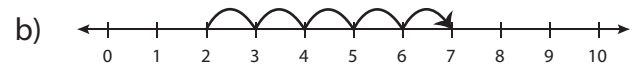
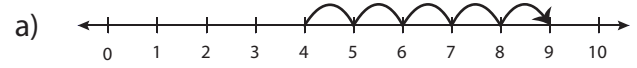
Sheet 1

Identify the correct number line for each addition sentence.

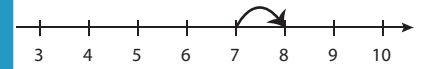
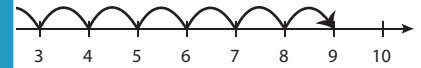
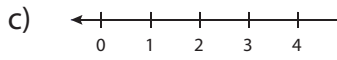
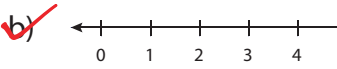
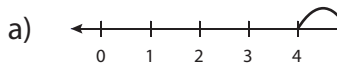
1) $5 + 3 = 8$



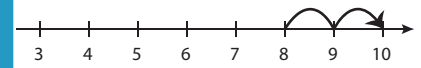
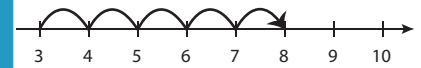
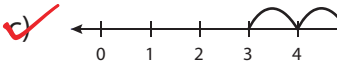
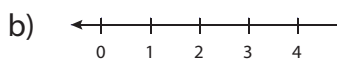
2) $7 + 2 = 9$



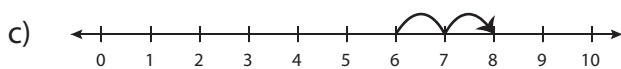
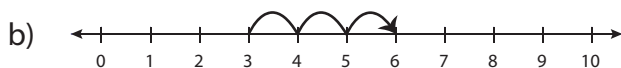
3) $6 + 4 = 10$



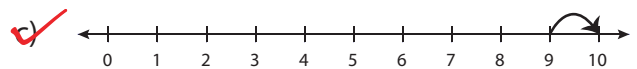
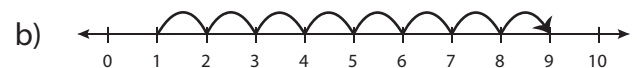
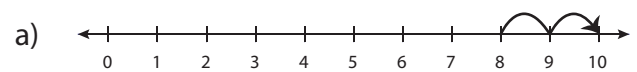
5) $3 + 3 = 6$



7) $4 + 2 = 6$



8) $9 + 1 = 10$



PREVIEW

Gain complete access to the largest collection of worksheets in all subjects!

Members, please log in to download this worksheet.

Not a member? Please sign up to gain complete access.

www.mathworksheets4kids.com