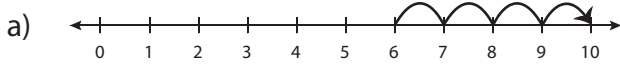


Number Line Addition - MCQ

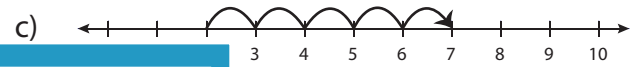
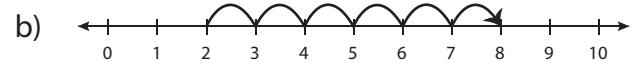
Sheet 2

Identify the correct number line for each addition sentence.

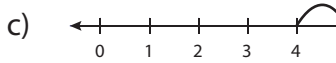
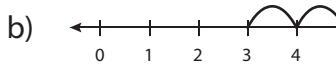
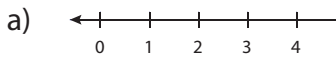
1) $4 + 4 = 8$



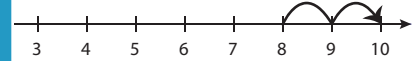
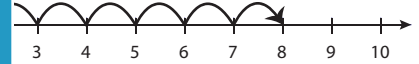
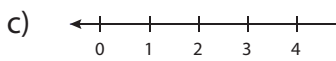
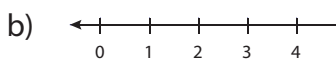
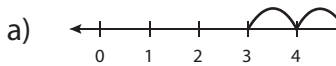
2) $2 + 5 = 7$



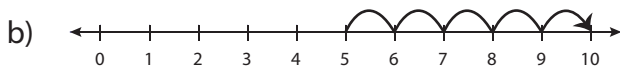
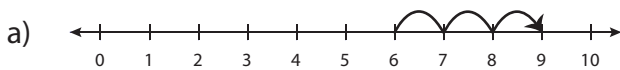
3) $7 + 3 = 10$



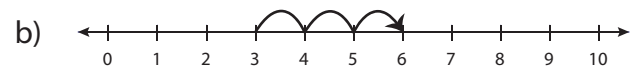
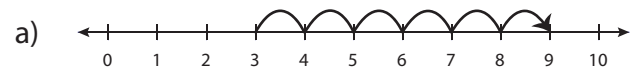
5) $5 + 4 = 9$



7) $1 + 9 = 10$



8) $3 + 6 = 9$



PREVIEW

Gain complete access to the largest collection of worksheets in all subjects!

Members, please log in to download this worksheet.

Not a member? Please sign up to gain complete access.

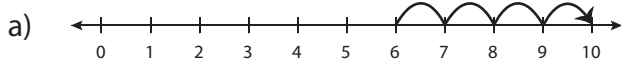
www.mathworksheets4kids.com

Answer key**Number Line Addition - MCQ**

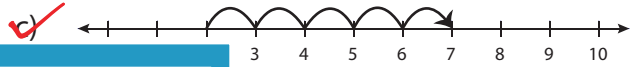
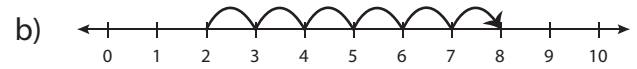
Sheet 2

Identify the correct number line for each addition sentence.

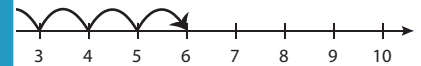
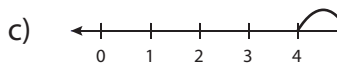
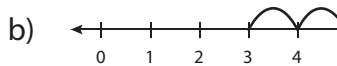
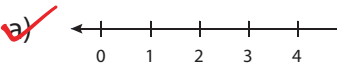
1) $4 + 4 = 8$



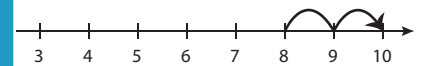
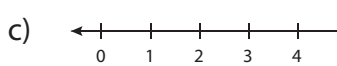
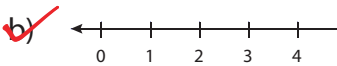
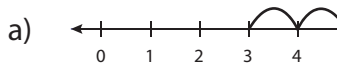
2) $2 + 5 = 7$



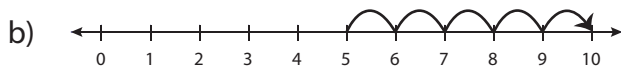
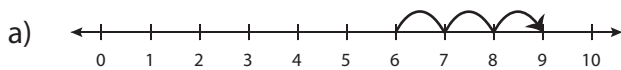
3) $7 + 3 = 10$



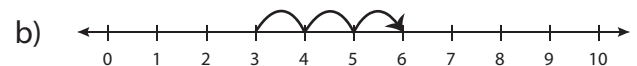
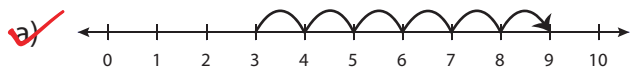
5) $5 + 4 = 9$



7) $1 + 9 = 10$



8) $3 + 6 = 9$

**PREVIEW**

Gain complete access to the largest collection of worksheets in all subjects!

Members, please log in to download this worksheet.

Not a member? Please sign up to gain complete access.

www.mathworksheets4kids.com