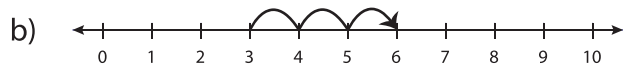


# Number Line Addition - MCQ

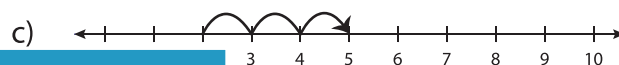
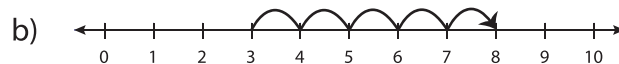
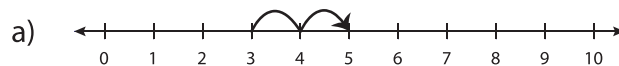
Sheet 4

Identify the correct number line for each addition sentence.

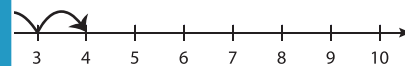
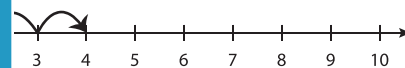
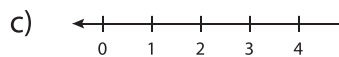
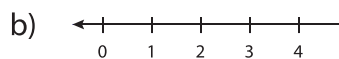
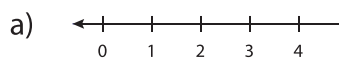
1)  $4 + 3 = 7$



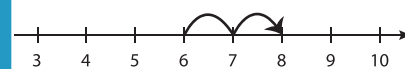
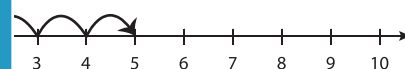
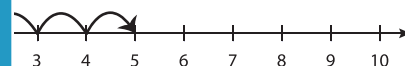
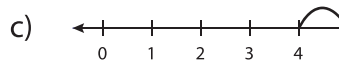
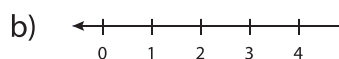
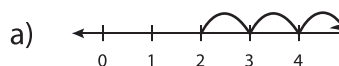
2)  $3 + 5 = 8$



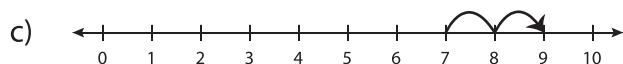
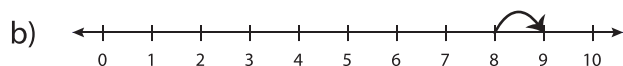
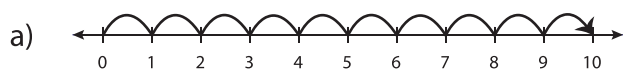
3)  $6 + 3 = 9$



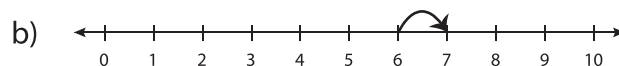
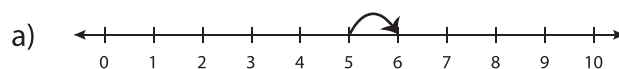
5)  $5 + 2 = 7$



7)  $0 + 10 = 10$



8)  $0 + 6 = 6$



# PREVIEW

Gain complete access to the largest  
collection of worksheets in all subjects!

Members, please  
log in to  
download this  
worksheet.

Not a member?  
Please sign up to  
gain complete  
access.

[www.mathworksheets4kids.com](http://www.mathworksheets4kids.com)