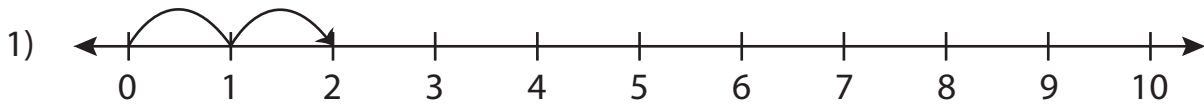


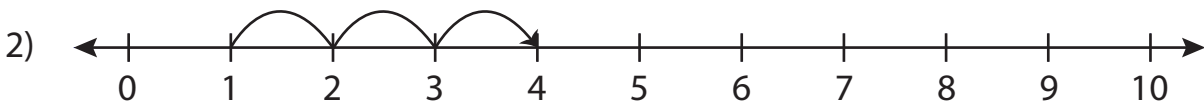
Addition Sentence - Missing Numbers

0-10: S1

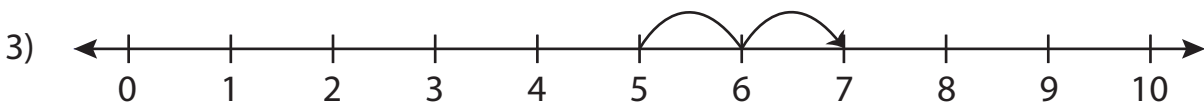
Complete the addition sentence that describes each model.



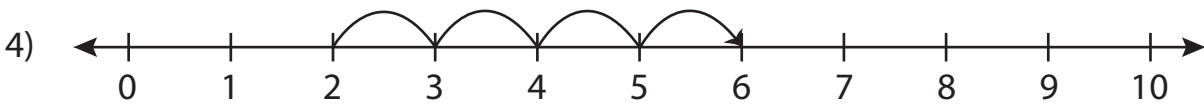
$$0 + 2 = \underline{\quad}$$



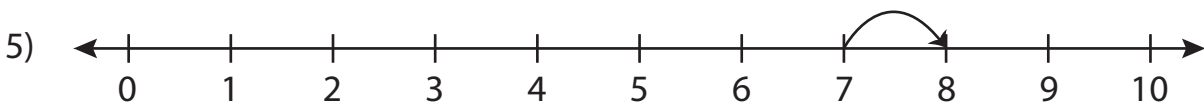
$$1 + \underline{\quad} = 4$$



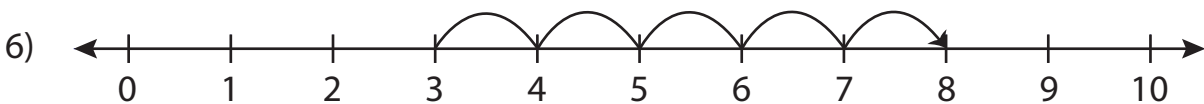
$$\underline{\quad} + 2 = 7$$



$$2 + 4 = \underline{\quad}$$



$$\underline{\quad} + 1 = 8$$

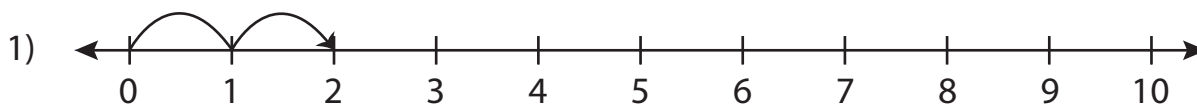


$$3 + \underline{\quad} = 8$$

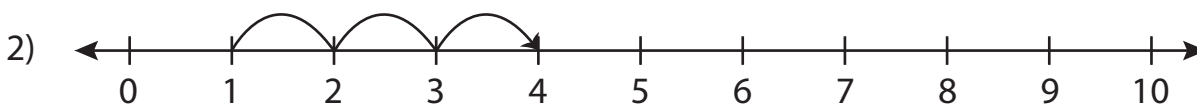
Addition Sentence - Missing Numbers

0-10: S1

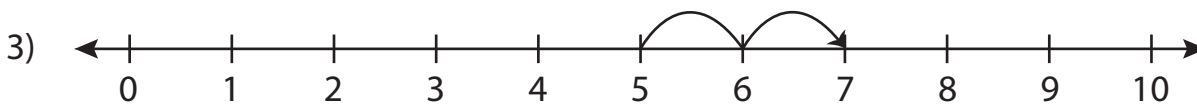
Complete the addition sentence that describes each model.



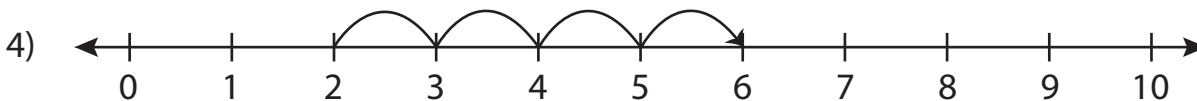
$$0 + 2 = \underline{2}$$



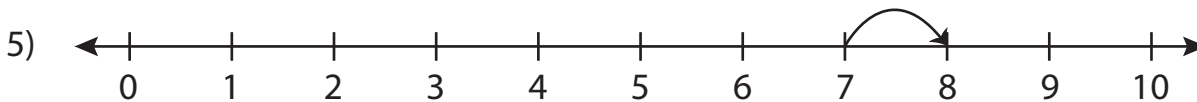
$$1 + \underline{3} = 4$$



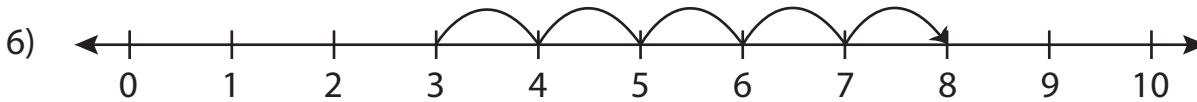
$$\underline{5} + 2 = 7$$



$$2 + 4 = \underline{6}$$



$$\underline{7} + 1 = 8$$



$$3 + \underline{5} = 8$$