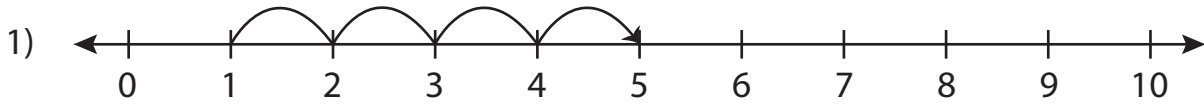


Addition Sentence - Missing Numbers

0-10: S2

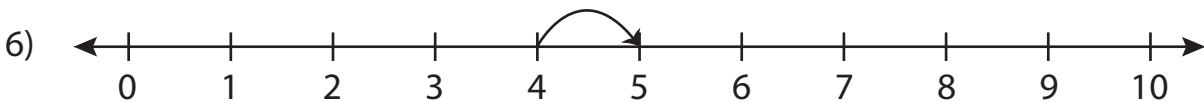
Complete the addition sentence that describes each model.



$$1 + \underline{\quad} = 5$$



$$5 + 5 = \underline{\quad}$$



$$\underline{\quad} + 1 = 5$$

PREVIEW

Gain complete access to the largest
collection of worksheets in all subjects!

Members, please
log in to
download this
worksheet.

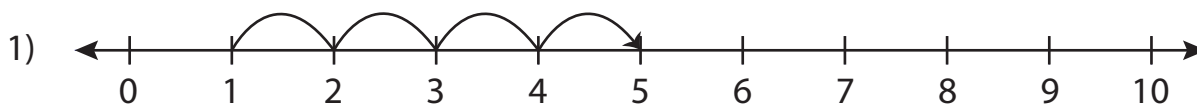
Not a member?
Please sign up to
gain complete
access.

www.mathworksheets4kids.com

Addition Sentence - Missing Numbers

0-10: S2

Complete the addition sentence that describes each model.



$$1 + \underline{4} = 5$$



PREVIEW

Gain complete access to the largest
collection of worksheets in all subjects!

Members, please
log in to
download this
worksheet.

Not a member?
Please sign up to
gain complete
access.

www.mathworksheets4kids.com



$$5 + 5 = \underline{10}$$



$$\underline{4} + 1 = 5$$