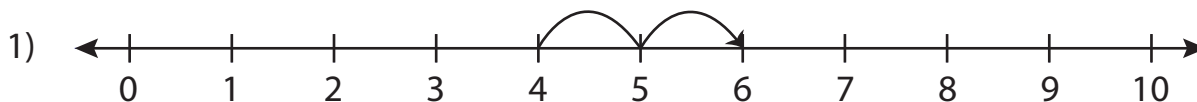


Addition Sentence - Missing Numbers

0-10: S3

Complete the addition sentence that describes each model.



$$\underline{\quad} + 2 = 6$$



$$0 + \underline{\quad} = 5$$



$$3 + 4 = \underline{\quad}$$

PREVIEW

Gain complete access to the largest collection of worksheets in all subjects!

Members, please log in to download this worksheet.

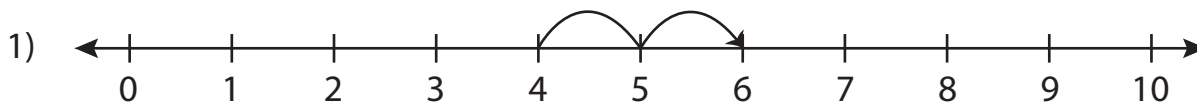
Not a member? Please sign up to gain complete access.

www.mathworksheets4kids.com

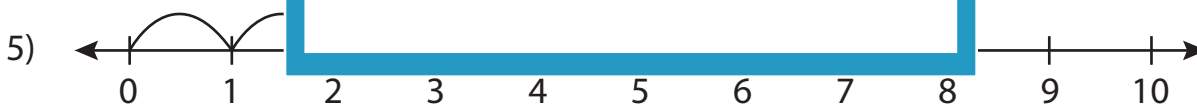
Addition Sentence - Missing Numbers

0-10: S3

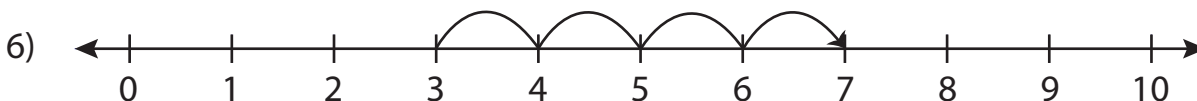
Complete the addition sentence that describes each model.



$$\underline{4} + 2 = 6$$



$$0 + \underline{5} = 5$$



$$3 + 4 = \underline{7}$$

Gain complete access to the largest
collection of worksheets in all subjects!

Members, please
log in to
download this
worksheet.

Not a member?
Please sign up to
gain complete
access.

www.mathworksheets4kids.com