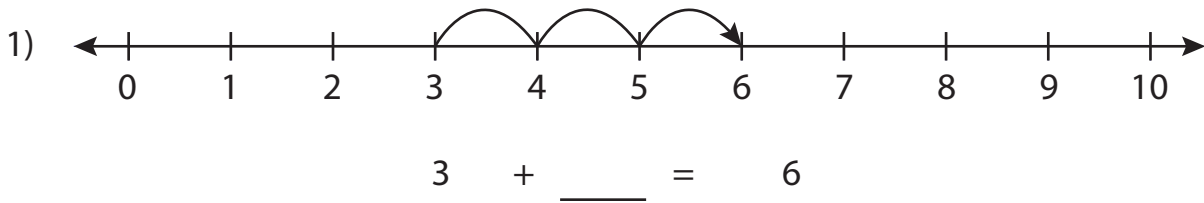


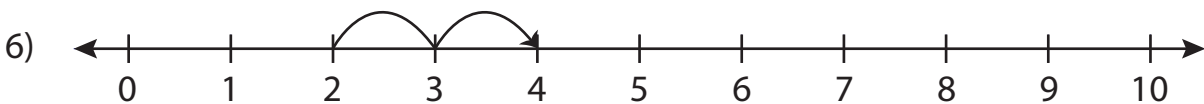
Addition Sentence - Missing Numbers

0-10: S4

Complete the addition sentence that describes each model.



$6 + 1 = \underline{\quad}$



$2 + \underline{\quad} = 4$

PREVIEW

Gain complete access to the largest
collection of worksheets in all subjects!

Members, please
log in to
download this
worksheet.

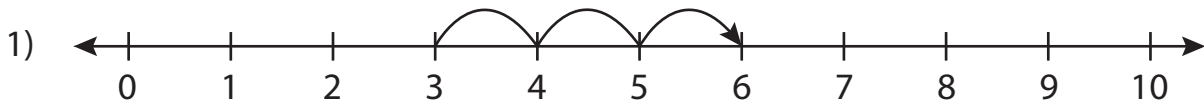
Not a member?
Please sign up to
gain complete
access.

www.mathworksheets4kids.com

Addition Sentence - Missing Numbers

0-10: S4

Complete the addition sentence that describes each model.



$$3 + \underline{3} = 6$$



PREVIEW

Gain complete access to the largest
collection of worksheets in all subjects!

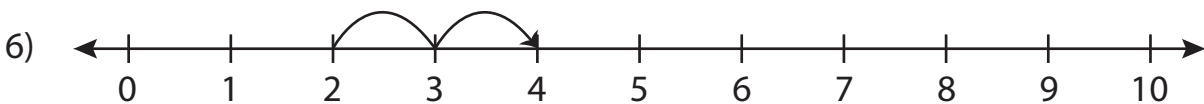
Members, please
log in to
download this
worksheet.

Not a member?
Please sign up to
gain complete
access.

www.mathworksheets4kids.com



$$6 + 1 = \underline{7}$$



$$2 + \underline{2} = 4$$