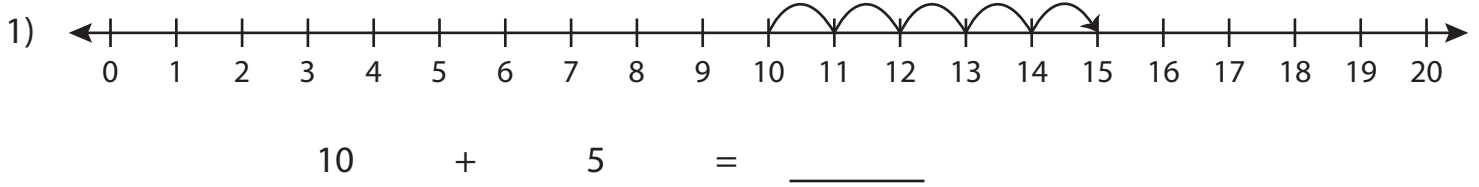


Addition Sentence - Missing Numbers

0-20: S1

Complete the addition sentence that describes each model.



9

PREVIEW

Gain complete access to the largest
collection of worksheets in all subjects!

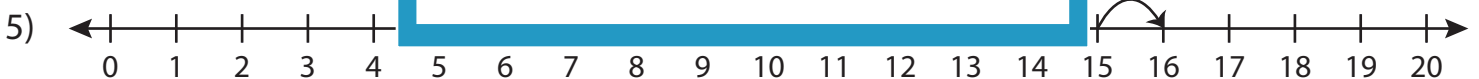
Members, please
log in to
download this
worksheet.

Not a member?
Please sign up to
gain complete
access.

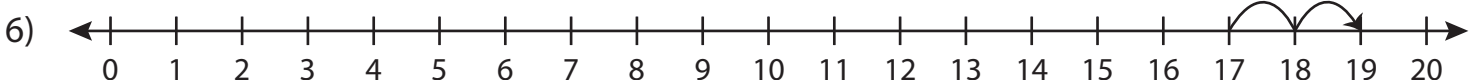
www.mathworksheets4kids.com



7



$\underline{\quad} + 1 = 16$

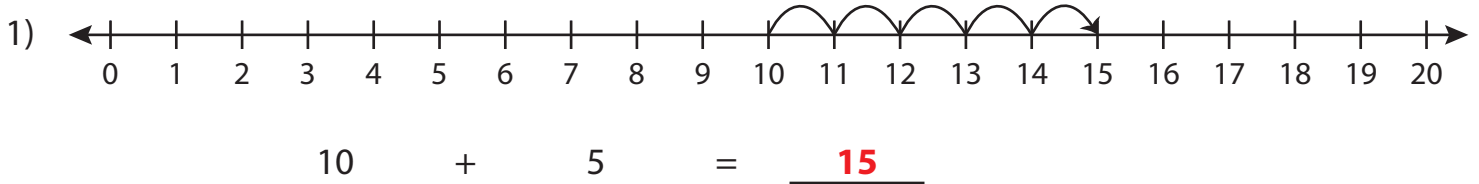


$17 + \underline{\quad} = 19$

Addition Sentence - Missing Numbers

0-20: S1

Complete the addition sentence that describes each model.



9

PREVIEW

Gain complete access to the largest collection of worksheets in all subjects!

Members, please log in to download this worksheet.

Not a member? Please sign up to gain complete access.

www.mathworksheets4kids.com