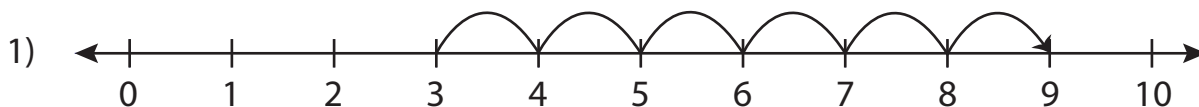


Addition Sentence

0-10: S1

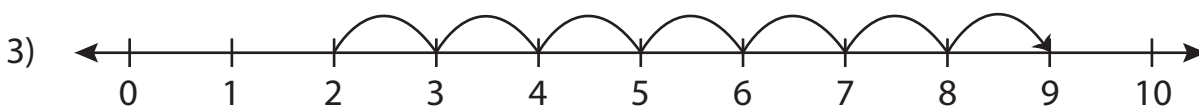
Write the addition sentence that describes each model.



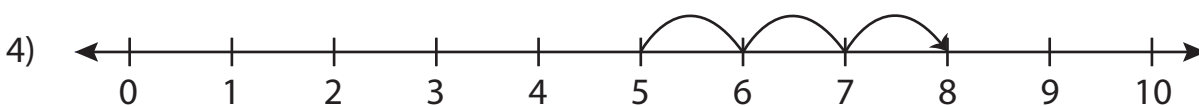
$$\underline{\quad} + \underline{\quad} = \underline{\quad}$$



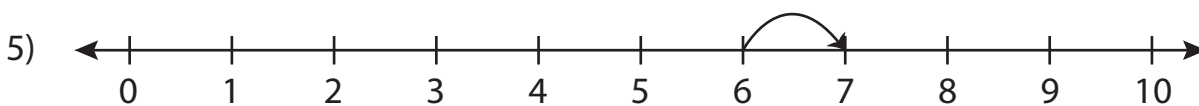
$$\underline{\quad} + \underline{\quad} = \underline{\quad}$$



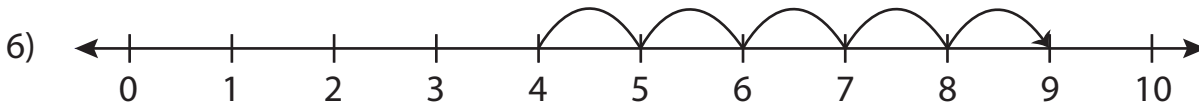
$$\underline{\quad} + \underline{\quad} = \underline{\quad}$$



$$\underline{\quad} + \underline{\quad} = \underline{\quad}$$



$$\underline{\quad} + \underline{\quad} = \underline{\quad}$$

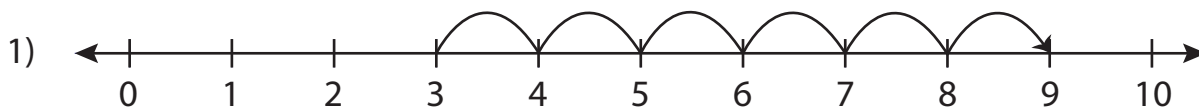


$$\underline{\quad} + \underline{\quad} = \underline{\quad}$$

Addition Sentence

0-10: S1

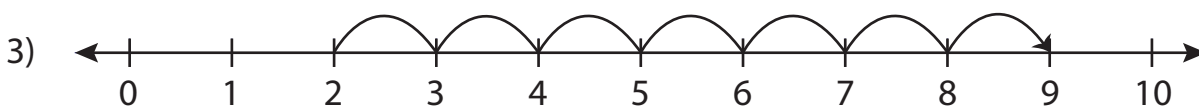
Write the addition sentence that describes each model.



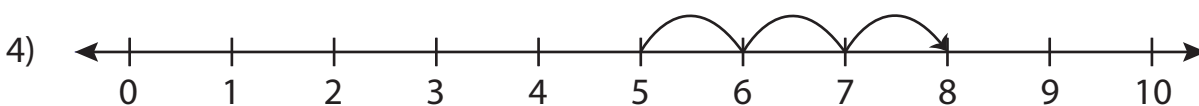
$$\underline{3} + \underline{6} = \underline{9}$$



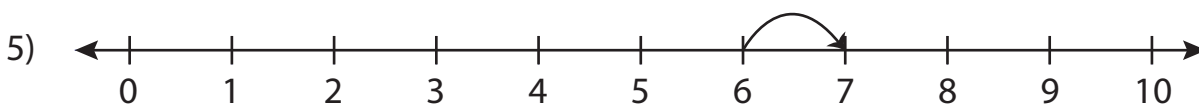
$$\underline{1} + \underline{4} = \underline{5}$$



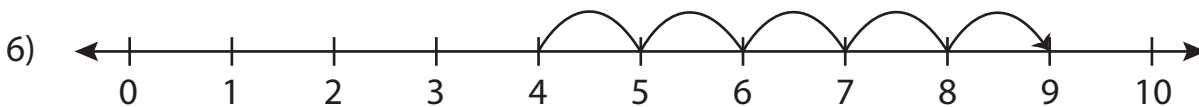
$$\underline{2} + \underline{7} = \underline{9}$$



$$\underline{5} + \underline{3} = \underline{8}$$



$$\underline{6} + \underline{1} = \underline{7}$$



$$\underline{4} + \underline{5} = \underline{9}$$