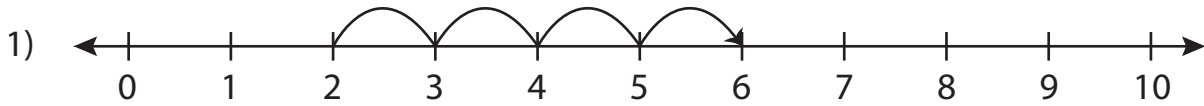


Addition Sentence

0-10: S3

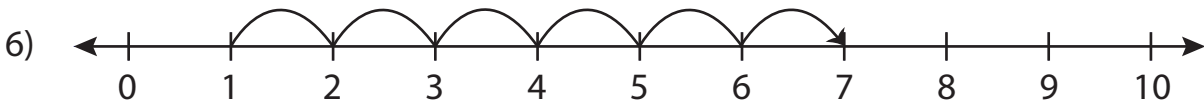
Write the addition sentence that describes each model.



$$\underline{\quad} + \underline{\quad} = \underline{\quad}$$



$$\underline{\quad} + \underline{\quad} = \underline{\quad}$$



$$\underline{\quad} + \underline{\quad} = \underline{\quad}$$

PREVIEW

Gain complete access to the largest collection of worksheets in all subjects!

Members, please log in to download this worksheet.

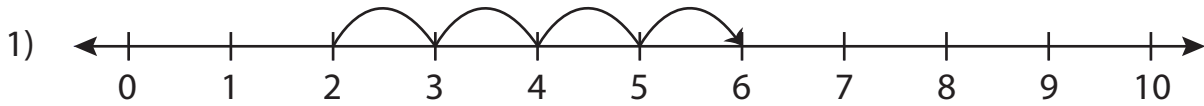
Not a member? Please sign up to gain complete access.

www.mathworksheets4kids.com

Addition Sentence

0-10: S3

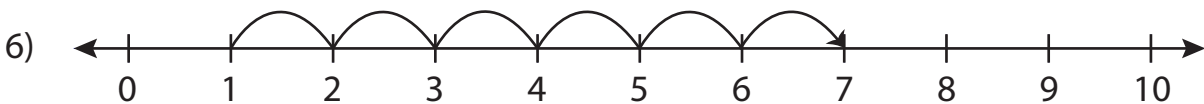
Write the addition sentence that describes each model.



$$\underline{2} + \underline{4} = \underline{6}$$



$$\underline{2} + \underline{5} = \underline{7}$$



$$\underline{1} + \underline{6} = \underline{7}$$

PREVIEW

Gain complete access to the largest collection of worksheets in all subjects!

Members, please log in to download this worksheet.

Not a member? Please sign up to gain complete access.

www.mathworksheets4kids.com