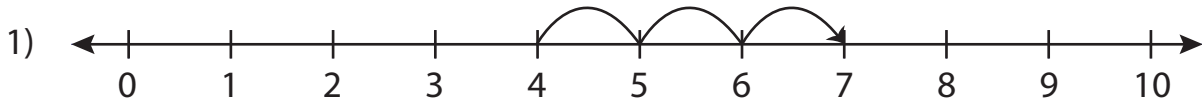


# Addition Sentence

0-10: S5

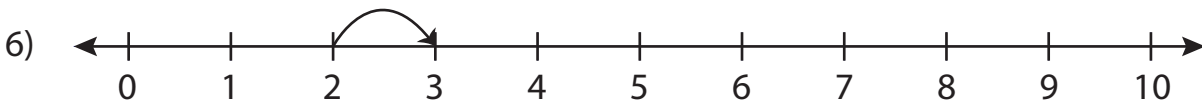
Write the addition sentence that describes each model.



$$\underline{\quad} + \underline{\quad} = \underline{\quad}$$



$$\underline{\quad} + \underline{\quad} = \underline{\quad}$$



$$\underline{\quad} + \underline{\quad} = \underline{\quad}$$

## PREVIEW

Gain complete access to the largest  
collection of worksheets in all subjects!

Members, please  
log in to  
download this  
worksheet.

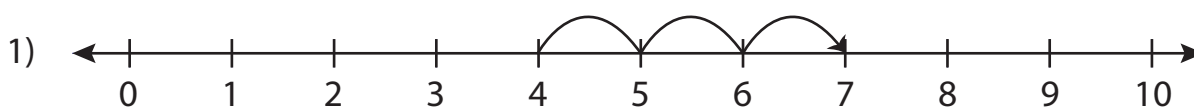
Not a member?  
Please sign up to  
gain complete  
access.

[www.mathworksheets4kids.com](http://www.mathworksheets4kids.com)

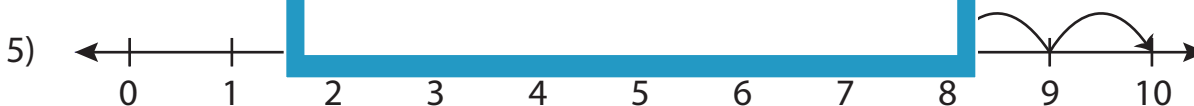
# Addition Sentence

0-10: S5

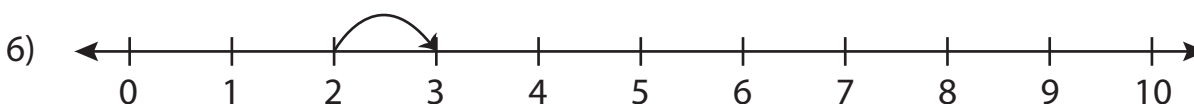
Write the addition sentence that describes each model.



$$\underline{4} + \underline{3} = \underline{7}$$



$$\underline{3} + \underline{7} = \underline{10}$$



$$\underline{2} + \underline{1} = \underline{3}$$

## PREVIEW

Gain complete access to the largest collection of worksheets in all subjects!

Members, please log in to download this worksheet.

Not a member? Please sign up to gain complete access.

www.mathworksheets4kids.com