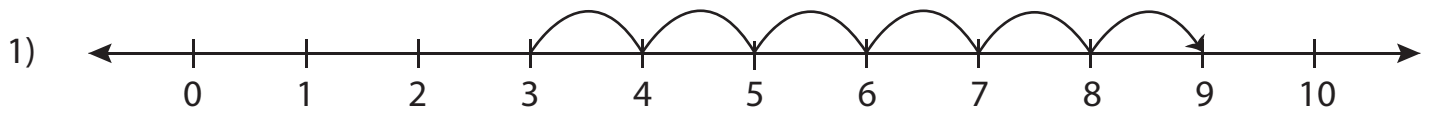


Number Line Addition - MCQ

Sheet 1

Identify the correct addition sentence for each number line.



a) $3 + 6 = 9$

b) $5 + 4 = 9$

c) $3 + 2 = 5$

d) $7 + 2 = 9$



a) $0 + 3 = 3$

d) $2 + 2 = 4$



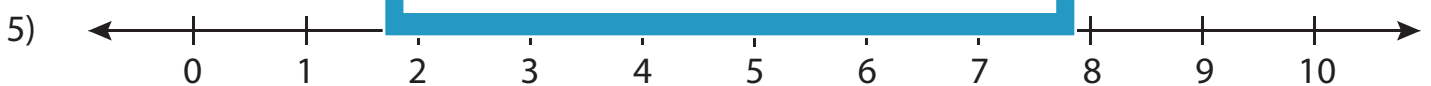
a) $5 + 2 = 7$

d) $6 + 2 = 8$



a) $5 + 5 = 10$

d) $4 + 6 = 10$

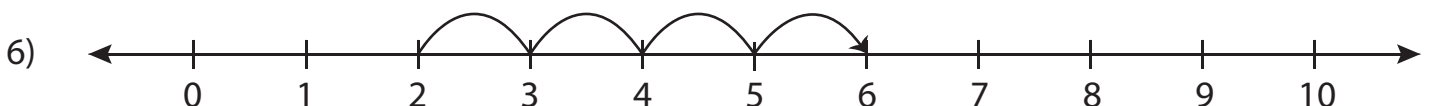


a) $0 + 6 = 6$

b) $5 + 1 = 6$

c) $0 + 7 = 7$

d) $6 + 1 = 7$



a) $3 + 4 = 7$

b) $2 + 4 = 6$

c) $2 + 6 = 8$

d) $3 + 3 = 6$

PREVIEW

Gain complete access to the largest
collection of worksheets in all subjects!

Members, please
log in to
download this
worksheet.

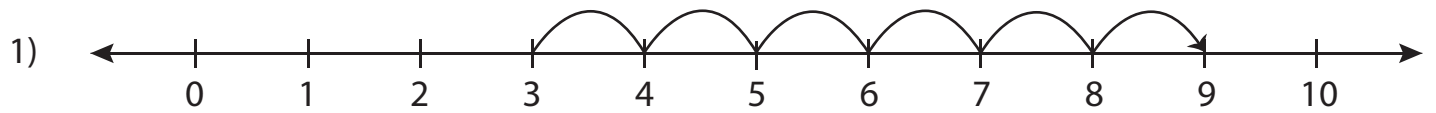
Not a member?
Please sign up to
gain complete
access.

www.mathworksheets4kids.com

Answer key**Number Line Addition - MCQ**

Sheet 1

Identify the correct addition sentence for each number line.



a) $3 + 6 = 9$

b) $5 + 4 = 9$

c) $3 + 2 = 5$

d) $7 + 2 = 9$



a) $0 + 3 = 3$

d) $2 + 2 = 4$



a) $5 + 2 = 7$

d) $6 + 2 = 8$



a) $5 + 5 = 10$

d) $4 + 6 = 10$

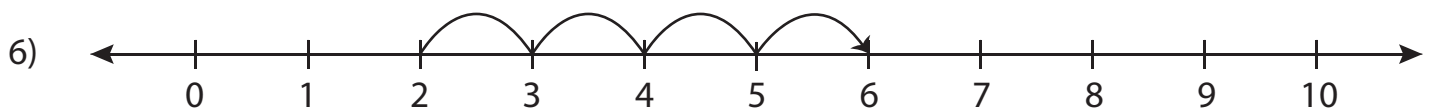


a) $0 + 6 = 6$

b) $5 + 1 = 6$

c) $0 + 7 = 7$

d) $6 + 1 = 7$



a) $3 + 4 = 7$

b) $2 + 4 = 6$

c) $2 + 6 = 8$

d) $3 + 3 = 6$

PREVIEW

Gain complete access to the largest
collection of worksheets in all subjects!

Members, please
log in to
download this
worksheet.

Not a member?
Please sign up to
gain complete
access.

www.mathworksheets4kids.com